

Thakur Educational Trust's (Regd.)
 THAKUR VIDYA MANDIR HIGH SCHOOL & JR.COLLEGE
 II TERMINAL EXAMINATION 2018- 2019

Subject: ENGLISH

Name: _____ Std: VII Div: _____

Roll No: _____

Marks: 100 Date: 08/02/2019

Time: 3hrs

Q1A Do as directed: (GRAMMAR)

(20)

- A1.1. The cat keeps the mice away. (Identify the part of speech for the underlined word) (1)
2. You _____ to wear a seat belt when you are in a car. (must /have) (1)
 (Fill in the blank with a suitable auxiliary)
3. Can you lend me _____ money. (much /some) (Fill in the blank with a countable noun) (1)
4. We are reading an interesting book. (State whether the underlined word is a verb or an adjective) (1)
5. The teacher read the _____ of names carefully.(list, library)(Fill in the blank with suitable noun) (1)
6. _____ road will you take?.(Fill in the correct question word) (1)
7. Tejas went to school _____ the morning. (in, to) (Fill in the Preposition from the bracket) (1)
8. The two embraced each other warmly. (Underline the adverb) (1)

- A2 1. That vase will break _____ you are not careful. (Fill in the blank with a suitable conjunction.) (1)
2. in the garden (Make a meaningful sentence using the given phrase) (1)
3. There is dirty water in the bucket. (Identify the Adjectives and state its kind) (2)
- 4.The harpoon was launched.(pick out the verb and say if they are transitive or intransitive) (2)
- 5.Read the sentences given below and complete the table: (2)

i) The thief sold the farmer a bull. ii) My daddy gave me a camera.

Subject	Verb	Indirect Object	Direct Object
1.			
2.			

- Q1B** i) why cant i buy a new watch (Punctuate the sentence) (2)
- ii) Mother said, "It is time for us to go back home." (Rewrite the sentence in Indirect speech) (2)

Q2A. Read the following passage and do the activities: (10)

- A1. Identify the prefix and find the words from the passage: (2)
1. _____ night.
2. _____ thing.
3. _____ over.
4. _____ day.

"It will be a fantastic birthday this year," I said in a mocking tone. "All I will get is a pair of shoes and a hand-knitted pullover. I had asked for a table tennis set, but my mother said, 'It is totally out of the question this year'."

My friend, Muk looked at me thoughtfully. He drew a bit closer and said, "Well, Rohan, I don't say I believe in it, but my cousin said it works. And there is no harm trying, don't you think?"

"Trying what?" I asked.

"Well, my cousin said, "If you really want something badly, all you have to do is to run around a banyan tree at midnight and chant seventeen times: Unke Munke, Timpetoo'."

I desperately wanted my wish to come true. Still I asked, "Why seventeen times and why at midnight?"

"Don't ask me,"

- A2.i) Name the chant in the passage. (1)
- ii) Who is Rohan's friend? (1)
- A3. I) Give one word from the passage which means – ' making fun of' (1)
- ii) Give adverb of – a) thoughtful - _____ b) total - _____ (1)
- A4 i) I don't say I believe in it, _____ my cousin said it works. (1)
 (Fill in the Conjunction and rewrite the sentence)
- ii) It will be a fantastic birthday this year.(Identify the tense) (1)
- A5. You have seen a magic trick being performed. What will be your reaction? Write few lines about it. (2)

Q2. B Read the following passage and do the activities: (10)

- B1. Rearrange the sentences in a proper sequence and rewrite it: (2)
- i) An occasional sip of homemade wine was all that kept him going.
- ii) I dug a shallow grave in the garden.
- iii) It was Caesar's gardening activities that finally led to disaster.
- iv) I carried the unfortunate bird home.

It was Caesar's gardening activities that finally led to disaster. He was helping himself to our neighbour's beans when a stick was flung at him, breaking his leg. I carried the unfortunate bird home, and Grandfather and I washed and bandaged his leg as best we could. But it would not mend. Caesar hung his head and no longer talked. He grew weaker day by day, refusing to eat. An occasional sip of Grandmother's homemade wine was all that kept him going.

One morning I found him dead on the sofa, his legs stiff in the air. Poor Caesar! His anti-social habits had led to his early end.

I dug a shallow grave in the garden, and buried him there, along with all the toothbrushes and clothes pegs he had taken so much trouble to collect.

- B2. i) Write the names of the two articles that were buried along with Caesar. (1)
ii) Find the synonym from the extract for the word 'mishap'. (1)
B3. i) Give plurals for – a) toothbrush - b) stick - (1)
ii) Give opposites of – a) alive x b) deep x (1)
B4. i) I dug a shallow grave in the garden...(Underline the Preposition) (1)
ii) It was Caesar's gardening activities that finally led to disaster. (Add a question tag) (1)
B5. Write few lines on what would you do if a crow or a pigeon came inside your house? (2)

Q3 A. Read the extract and do the following activities: (5)

A1. Match the following: (2)

A	B
1. stony	1. foreland
2. eddying	2. river
3. fairy	3. ways
4. brimming	4. bays

I chatter over stony ways,
In little sharps and trebles,
I bubble into eddying bays,
I babble on the pebbles.

With many a curve my banks I fret
By many a field and fallow,
And many a fairy foreland set
With willow-weed and mallow.

I chatter, chatter, as I flow
To join the brimming river,
For men may come and men may go,
But I go on for ever.

- A2.i) Mention any two places that the brook flows past. (1)
ii) Who is the speaker in the poem? (1)
A3. With willow-weed and mallow. (Identify the figures of speech) (1)

Q3. B Write the appreciation of the following poem with the help of the guidelines given below: (10)

*Title * Poet * Rhyme Scheme * Favourite line * Theme * Figures of Speech* Type of the poem
(at least 5-6 lines) * Why you like/don't like the poem.

Under the Greenwood Tree

Under the greenwood tree
Who loves to lie with me,
And turn his merry note
Unto the sweet bird's throat,
Come hither, come hither, come hither!
Here shall he see
No enemy
But winter and rough weather.

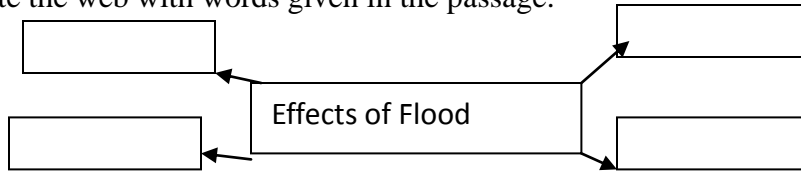
Who doth ambition shun,
And loves to live i'the sun,
Seeking the food he eats,
And pleased with what he gets,
Come hither, come hither, come hither:
Here shall he see
No enemy
But winter and rough weather.

- William Shakespeare

Q4. A. Read the passage and do the activities: (10)

A1. Complete the web with words given in the passage:

(2)



During the devastating July 2005 floods that hit Mumbai, Rajen Dutia received an urgent call from a relative, Lopa Vyas, late in the evening. “A friend’s mother is stranded near your home, Rajen. Can you please take her home? Her name is Rashmi,” Vyas told him.

Mumbai had come to a halt and people were trapped everywhere. Despite power failure and raging rain, Dutia stepped out and made his way to the spot, where he found Rashmi as well as a dozen other people. They were stranded in the dark, shivering in the rain. They all lived far away and had no place to go for the night.

Rajen took all of them to his one-bedroom flat, where he served them dinner and invited them to spend the night.

“By doing so,” Says Rajen, “I was simply fulfilling my Karma, paying the universe back for the good it had done for me.”

“God is kind My daughter had just started her new job that day and had gone for her training. She was stranded too. While she was trying to get to our relatives, she almost drowned, but a young stranger saved her. He and his friends even dropped her to my relative’s place and phoned me to say she was safe. One good turn deserves another.”

A2. Fill in the blanks:

(2)

1. They were _____ in the dark, shivering in the rain.

2. One good turn deserves _____.

A3. i) Write the noun form of – i) relative-

ii) invite-

(1)

ii) Pick out 2 words ending with ‘ing’.

(1)

A4.i) They all lived far away and had no place to go for the night. (Underline the Conjunction)

(1)

ii) Frame sentence on your own with the given word – ordinary

(1)

A5. You get a call from a relative to help someone during natural calamities, what will be your immediate action. Write a few lines with the help of the above passage.

(2)

Q4B Read the above unseen passage and write a summary/précis writing. Give a suitable title. (5)

SECTION : V (Writing Skills)

Q5. A. Letter writing:

(5)

A1. Write a letter to the school Principal requesting her for the change of division.

OR

A2. Write a letter to your elder brother to advise you how to prepare for the upcoming examination.

Q5. B. Interview/ Dialogue writing.

(5)

B1. You are to interview your school Principal for achieving the Best School award. Write 10 questions that you would ask her.

OR

B2. Write a dialogue between the bus conductor and yourself discussing about the rise in the bus fare.

Q6.Report writing:

(5)

A1. Write a report of the recent Republic Day Celebrations held in your school to be published in the school magazine.

OR

A2. In your locality a fire broke out causing a lot of destruction. Write a report on this incident to be published in a local newspaper.

Q6. Information transfer

B1.. From the given paragraph prepare a tree diagram:

(5)

In order to fulfil different needs humans are engaged in a variety of activities called occupations. Human occupation and their types are classified on the basis of these differences. Some occupations are directly related with material collecting and using things that are available in nature are called Primary occupations. For example:- Fishery, agriculture mining etc. Primary products used as raw material to obtain new things are called Secondary Occupations example - Cloth obtained from cotton, sugar obtained from sugarcane, furniture from wood. Some occupations are supportive through primary and secondary occupations. They are called Tertiary occupations. There are no materials manufactured or obtained. For example:- Transportation, banking etc. All the human occupations directly or indirectly depend on natural resources.

.OR

B2.. From the given tabular /table write a paragraph:

NAME	Saint Mother Teresa
DATE AND PLACE OF BIRTH	26H AUGUST , 1910, born in Skopje Macedonia (formerly Yugoslavia)
KNOWN FOR	Helping the poor, sick and the miserable and took care of the people suffering from leprosy
AWARD RECEIVED	Padma Shri , Noble Peace Prize,Bharat Ratna
SERVED	Served poorest of the poor
DIED ON	5 th September, 1997

Q7A. Expansion of idea (Any one)

(5)

1. To serve humanity is to serve God.
2. A stitch in time saves nine.

Q7B. Speech writing:

(5)

B1. Write a speech to be delivered in your society about 'The importance of birds and animals in our lives'.(5)

OR

B2. Write a speech to be given the students of your school describing the importance of good health and exercise.

******* ALL THE BEST*******

Q1A Do as directed: (GRAMMAR)

(20)

- A1. 1. I carried the unfortunate bird home.(Identify the part of speech for the word 'unfortunate') (1)
2.That was _____done. (greatly / easily) (Choose the right adverb) (1)
3.The floor _____be level.(must / have) (Fill in the right modal auxiliary) (1)
4.But my friend has escaped. (State whether "escaped " is a verb or a noun) (1)
5.The children listened _____.(Fill in a suitable adverb) (1)
6._____clothes are these? (Fill in a "Wh" word to make it a question) (1)
7. The island was _____enchanted one. (Fill in the blank with a suitable article) (1)
8. The Trip to the moon was an exhorbitantly expensive one.(Pick out the subject) (1)
- A 2. 1. we stood mute _____ motionless. (Fill in a suitable conjunction) (1)
2. to be extremely careful. (Make a meaningful sentence with the given phrase) (1)
3. Go and get some food. (Pick out the adjective and state its kind) (2)
4. You appear to be smart. (Pick out the verb and state whether it is transitive or intransitive) (2)
5. Classify the sentences given below as Subject, Verb, Indirect Obect and Direct Object (2)
i) Our English teacher told us a story. ii) Akbar appointed Birbal the Royal Advisor.

Q 1 B. Do as directed

- 1) why cant i go to play (Punctuate the sentence) (2)
2) Father said, "We will be going out today." (Rewrite the sentence in Indirect Speech) (2)

Q2A. Read the following passage and do the activities: (10)

A 1. Identify the prefix and find the words from the passage: (2)

1. _____night. 2. _____thing.
3. _____over. 4. _____day

"It will be a fantastic birthday this year," I said in a mocking tone. "All I will get is a pair of shoes and a hand-knitted pullover. I had asked for a table tennis set, but my mother said, "It is totally out of the question this year."

My friend, Muk looked at me thoughtfully. He drew a bit closer and said, "Well, Rohan, I don't say I believe in it, but my cousin said it works. And there is no harm in trying, don't you think?"

"Trying what ?" I asked.

Well my cousin said, " If you want something badly, all you have to do is to run around a banyan tree at midnight and chant seventeen times: Unke Munke,Timpetoo."

I desperately wanted my wish to come true. Still I asked, "Why seventeen times and why at midnight?"

"Don't ask me."

A 2. i) What is your favourite chant. (1)

ii) Who is Muk? (1)

A 3. i)Give one word from the passage which means - " to have faith in something" (1)

ii) Give the adverb of: a) thoughtful- _____ b) total- _____ (1)

A 4.i) I don't say I believe in it,_____ my cousin said it works. (Fill in the conjunction and rewrite the sentence) (1)

ii) It will be a fantastic birthday this year. (Identify the tense) (1)

A 5. You have a wish. you want it to come true. What steps will you take to realise it? (2)

Q2. B Read the following passage and do the activities: (10)

B1. Rearrange the sentences in a proper sequence and rewrite it: (2)

i) An occasional sip of homemade wine was all that kept him going.

ii) I dug a shallow grave in the garden.

iii) It was Caesar's gardening activities that finally led to disaster.

iv) I carried the unfortunate bird home.

It was Caesar's gardening activities that finally led to disaster. He was helping himself to our neighbour's beans when a stick was flung at him, breaking his leg. I carried the unfortunate bird home, and Grandfather and I washed and bandaged his leg as best as we could. But it would not mend. Caesar hung his head and no longer talked. He grew weaker day by day, refusing to eat. An occasional sip of Grandma's homemade wine was all that kept him going.

One morning I found him dead on the sofa, his legs stiff in the air. Poor Caesar! His anti-social habits had to his early end.

I dug a shallow grave in the garden, and buried him there, along with all the toothbrushes and clothes pegs he had taken so much trouble to collect.

- B 2.i) Write the names of two articles that were buried with Caesar. (1)
 ii) Find the synonym for the word "mishap" from the extract. (1)
 B 3. i) Give plurals for - a) habit - b) grave - (1)
 ii) Give the opposites of : a) alive x b) deep x (1)
 B 4. i) One morning I found him dead on the sofa. (underline the Preposition) (1)
 ii) I dug a shallow grave in the garden. (Add a question tag) (1)
 B 5. Write a few lines on what you would do if a crow or a pigeon entered your house? (2)

Q3 A. Read the extract and do the following activities: (5)

A1. Complete the following lines (2)

- i) Here is a child -----
 ii) Here is a tramp -----

All of the sights
 of the hill and the plain
 Fly as thick
 as driving rain;
 And ever again,
 in the wink of an eye,
 Painted stations
 whistle by.

Here is a child
 who clammers and scrambles,
 All by himself
 and gathering brambles;
 Here is a tramp
 who stands and gazes;
 And there is the green
 for stringing the daisies

- A2.i) Write two pairs of rhyming words.. (1)
 ii) Who whistles by? (1)
 A3. Fly as thick as driving rain; . (Identify the figures of speech)

Q3. B Write the appreciation of the following poem with the help of the guidelines given below: (10)

*Title * Poet * Rhyme Scheme * Favourite line * Theme * Figures of Speech* Type of the poem
 (at least 5-6 lines) * Why you like/don't like the poem.

Under the Greenwood Tree

Under the greenwood tree
 Who loves to lie with me,
 And turn his merry note
 Unto the sweet bird's throat,
 Come hither, come hither, come hither!
 Here shall he see
 No enemy
 But winter and rough weather.

Who doth ambition shun,
 And loves to live i'the sun,
 Seeking the food he eats,
 And pleased with what he gets,
 Come hither, come hither, come hither:

Here shall he see
 No enemy
 But winter and rough weather.

- William Shakespeare

Q4. A. Read the passage and do the activities: (10)

A1. Fill in the blanks (2)

- One finds time to take some exercise in the _____ morning air.
- Before _____ time sleep is most refreshing.
- In the early morning the _____ is fresh.
- Exercise supplies us with a good deal of _____.

The great advantage of early rising is that one can start one's work long before others. The early riser has done a large amount of work before other men have got out of bed. In the early morning the mind is fresh and no sounds or noises disturb our attention. The work done at that time is generally well done. Also one finds time to take some exercise in the fresh morning air. Exercise supplies him with a good deal of energy that enables him to work hard until the evening. By beginning so early, he knows that he has plenty of time thoroughly. He has not to hurry over any part of his work. He gets to sleep long before midnight. At that time sleep is most refreshing. After a sound night's rest, he rises early next morning in good health for the labour of a new day.

- A2. i) What advantage does an early riser have over others? (1)
ii) Write any one use of going to sleep long before midnight? (1)
- A3. Give the noun form of – i) fresh - ii) disturb – (2)
- A4.i) The early riser has done a large amount of hard work before other men have got out of bed. (Underline the articles) (1)
ii) Frame sentence on your own with the given phrase – has plenty of (1)
- A5. Write a few lines on the benefits of rising early and its importance. (2)

Q4B Read the above unseen passage and write a summary/précis writing. Give a suitable title. (5)

SECTION : V (Writing Skills)

Q5. A. Letter writing: (5)

A1. Write a letter to the municipal commissioner complaining about menace of vendors outside the school.

OR

A2. Write a letter of good wishes to a friend on his birthday.

Q5. B. Dialogue writing / Interview questions: (5)

B1. Write a dialogue between a doctor and a patient.

OR

B2. Write a 10 interview questions to be asked to a sportsperson who has just been awarded by the President.

Q6 A. Information transfer (5)

A1. From the given Do's and Don'ts write a paragraph (verbal form)

Do's	Don'ts
1. Throw waste in the dustbin	1.Avoid using plastic bags
2. Keep the place clean and tidy	2. Do not spit in open space
3. Help to save the environment	3. Do not litter
4.Clear away the mess	4. Do not pluck flowers and fruits.

OR

A2. From the given paragraph prepare a Tree diagram:

We often say there are two sorts of natural resources: renewable resources and non-renewable resources .A renewable resource is one which can be used again and again. For example, soil, sunlight and water are renewable resources. A non-renewable resource is a resource that does not grow and come back, or a resource that would take a very long time to come back. For example, coal is a non-renewable resource. When we use coal, there is less coal afterward. The non-renewable resource can be used directly (for example, burning oil to cook).

Q6B. Report writing (5)

B1. Write a newspaper report on the recent cyclone in the Arabian Sea that hit the city.

OR

B2. Write a report for the school magazine on the Carnival Day Celebration.

Q7A. Expansion of idea (Any one) (5)

1. An idle mind is a devil's workshop.
2. Slow and steady wins the race.

Q7B. Speech writing (5)

B1. Write a speech to be delivered in your school on the occasion of Teacher's Day Celebration.

OR

B2. Write a speech given by the Corporator of your area on the inauguration of the Children's Park.

Thakur Educational Trust's (Regd.)
THAKUR VIDYA MANDIR HIGH SCHOOL & JR.COLLEGE

II Term Exam 2018- 2019

Subject: Geography.

Name: _____ STD: VII Div: _____ Roll No: _____
Marks: 40 Date: 05/02/ 2019 Time: 2 Hrs.

Q.1 (A) Read the following statement and correct the wrong ones: (4)

1. Carnivorous animals like tigers and lions are found in large numbers in the equatorial regions.
2. When it is summer in South Africa, Australia has winter.
3. Rice is the staple diet of the people from Konkan.
4. Farm size is huge in intensive farming.

Q.1 (B) Fill in the blanks: (4)

1. High tide helps in _____ activity. (Fishing, farming, mining)
2. The _____ pressure belt spreads between 5° N 5° S parallels. (Equatorial flow, Polar high, Sub Polar low)
3. From high air pressure regions, wind.
 - a. Blow to regions of still high pressure.
 - b. Blow towards regions of low air pressure.
 - c. Remain still.
4. Agriculture requires to following.
 - a. Only ploughing.
 - b. use of animals implements, machines and manpower.
 - c. use of only manpower.
 - d. just cultivate crops.

Q.2 (A) Answer in one sentence: (4)

1. What are the two main types of tides ?
2. Which winds do blow all round the year ?
3. For which product is the district of Sindhudurg famous ?
4. Which day is the longest day in the northern hemisphere ?

Q.2 (B) Complete the following table: (4)

Factor / process	Role in the formation of soil
1. Parent rock	_____
2. Regional climate	_____
3. Organic material	_____
4. Micro organisms	_____

Q.3 (A) Write the geographical reasons for the following: (any 3) (5)

1. Tides are influenced more by the moon than the sun.
2. Vegetation is short lived in Tundra region.
3. To the west of Sahyadris, laterite soils are formed from basalt rock.
4. The monsoon winds in the summer come from the sea but the retreating monsoon winds in winter come from land.

Q.3 (B) Observe the diagram and answer the questions: (4)

- 1). Which phase of the moon does it show ?
- 2). What are the relative positions of the moon, the sun and the earth ?
- 3). What effect will it have on the tides ?

Q.4 (A) Answer the following in brief: (Any 2)

(6)

- 1). What is meant by the cycles of the seasons?
- 2). Mention the major types of farming and give information about, intensive farming and extensive farming?
- 3). What are the measures for soil conservation?

Q.4(B)(i) Draw a diagram of Equinoxes.

(4)

- (ii) Draw a neat diagram showing pressure belts, label the diagram.

Q.5 (A) Show the following items in the outline map of the world. Prepare the index.

(4)

- i). Colorado Desert.
- ii) Inhabited part of Greenland.
- iii) Down grasslands.
- iv) North America.
- v) Australia.
- vi) Africa.
- vii) Atlantic Ocean.
- viii) Arctic Ocean.

THAKUR VIDYA MANDIR HIGH SCHOOL & JR.COLLEGE
II TERM RE-EXAM 2018- 2019
Subject: Geography

STD : VII
Marks : 40

Date : 21/02/2019

Time: 2 hrs.

Q.1(A) Read the following statement and correct the wrong ones. (4)

1. The Prairie region is called the wheat basket of the world.
2. When it is summer in South Africa, Australia has winter.
3. Rice is the staple diet of the people from Konkan.
4. In India, commercial farming is practiced on a large scale.

Q.1 B. Fill in the blanks. (4)

1. High tide helps in _____ activity.
(Fishing, Farming, Mining)
2. The _____ pressure belt spreads between 5° N 5° S parallels.
3. On the earth, air pressure is
(uniform, uneven, high)
4. In which of the following type of farming are the crops rotated?
(Intensive, Plantation, Commercial, All of these)

Q.2 A. Answer in one sentence. (4)

1. What are the two main types of tides?
2. Which winds do blow all round the year?
3. For which product is the district of Sindhudurg famous?
4. What is the period of dakshinaya?

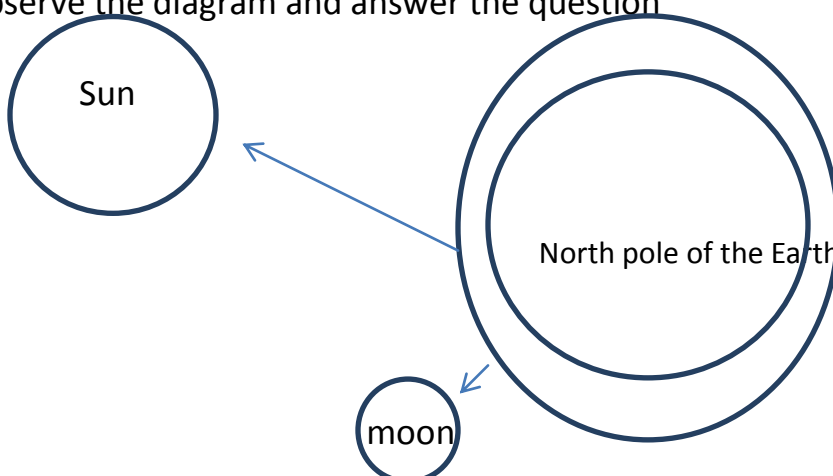
Q.2 B. Complete the following table. (4)

Sr. No.	Factor/Process	Role in the formation of soil
1	Parent rock	-----
2	Regional climate	-----
3	Organic material	-----
4	Micro –organisms	-----

Q.3 A. Write the geographical reasons for the following: (any Three) (6)

1. Pressure belt oscillate.
2. Vegetation is short lived in Tundra Region.
3. To the west of Sahyadris, laterite soils are formed from basalt rock.
4. People in the monsoon region are mainly engaged in agriculture.

Q.3 B. Observe the diagram and answer the question



1. Which phase of the moon does it show?
2. What are the relative positions of the moon, the sun and the earth?
3. What Effect will it have on the tides?

Q.4A. Answer the following in brief. (Any 2) (6)

1. Explain the relation between soil and rise of civilization?
2. Mention the major types of farming and give information about intensive farming and extensive farming?
3. What are the measures for soil conservation?

Q.4 B. i) Draw a diagram of Equinoxes. (4)

ii) Draw a diagram, showing occurrence of Spring Tides.

Q.5 A. Show the following items in the outline map of the world. Prepare the index.

- i) Colorado Desert
- ii) Inhabited part of Greenland
- iii) North America
- iv) Atlantic Ocean
- v) Arctic Ocean
- vi) Africa
- vii) Down Grasslands

ALL THE BEST

Name: _____ STD:VII Div: _____ Roll No: _____
 Marks: 60 Date: 09/02/2019 Time: 2hrs.30mins

HISTORY

Q1. A. Fill in the blanks in the given statements choosing the correct alternative from the brackets. (4)

1. Sant _____ composed RamcharitaManas on the theme of Rambhakti.(SantMirabai ,SantTulsidas, SantKabir)
2. The _____ were the link between the people and the government .(Varkaris ,Watandars,Patil)
3. Mores of Javali,Ghorpades of Mudhol,Sawants of Sawantwadi were the _____ of Shi-vajiMaharaj .(associates ,officers ,opponents)
4. The III Battle of Panipat took place on _____ between the Marathas and Abdali.(5th April 1663 ,14th January 1761 ,6thJune 1674)

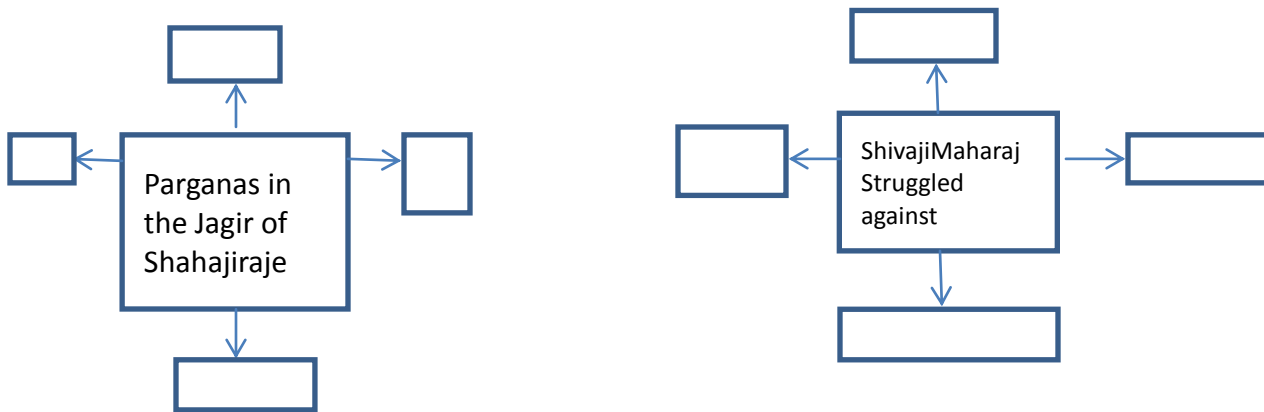
Q1. B. Identify the wrong pair and rewrite the corrected one. (4)

- a. 1.Sant Ramanand - North India
 2.Chaitanya Mahaprabhu -Bengal
 3.Narsi Mehta -Maharashtra
 4.Basaveshwar -Karnataka
- b. 1.Mauja - Small village
 2.Pargana -Centre of Varkari movement
 3.Kasba -Big Village
 4.Patil -Chief of the village
- c. 1.Council of 8 ministers -AshtapradhanMandal
 2.Head of Intelligence Department -HambirraoMohite
 3.Sea fort -Sindhudurg
 4.Highest officer in the army -Sarnobat
- d. 1.Ruler of Bundelkhand -king Chhatrasal
 2.He looted Delhi and returned to Iran -Nadirshah
 3.First Peshwa -Bajirao I
 4.He defeated the Portuguese - Chimajiappa

Q2. A. Complete the following concept map. (any 2) (4)

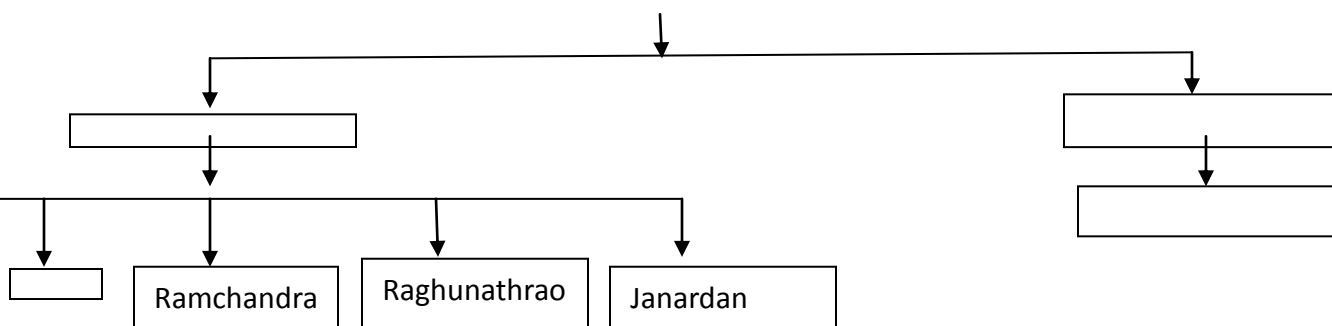
1)

2)



2) FAMILY TREE OF THE PESHWAS:

Balaji Vishwanatha



Q2. B.Short Notes. (any 2)

(4)

1. Escape from Agra
2. Maratha war of Independence
3. Cavalry of Shivaji Maharaj
4. Balaji Vishwanath

Q3.A Explain the following statements with reasons.(any 2)

(6)

1. The Marathas were defeated in the III Battle of Panipat .
2. Azamshah released Shahu Maharaj from his custody .
3. The conduct of Maharani Yesubai was patriotic and selfless .
4. Shivaji Maharaj established a council of eight ministers .
5. Shivaji Maharaj got himself coronated .

Q3. B. Answer the following in 25-30 words (any 2)

(6)

1. How did Shivaji Maharaj teach a lesson to the Mughals for the ravage caused by Shaistakhan ?
2. Which were the grave dangers in the life of Shivaji Maharaj ?
3. Explain the term Chauthai and Sardeshmukhi . .

Q4. Read the passage and answer the questions given below.

(4)

The forts situated within the Jagir of Shivaji Maharaj were not under his control but under the control of Adilshah. In those days ,forts were of special significance .With a firm hold over a fort,it was possible to control the surrounding area .If one had forts ,one ruled the land.Therefore Shivaji Maharaj decided to acquire the forts that were within his jagir .He captured the forts of Torana ,Murumdev,Kondhana and Purandar ,and laid the foundation of Swaraj .

Questions :

- 1.To whom did the forts within the Jagir of Shivaji Maharaj belong ?
- 2.What had special significance in those days?
3. Why did Shivaji Maharaj focus on capturing more forts ?
- 4.Name any two forts mentioned in the passage .

Q5. Answer in detail. (any 2)

(8)

1. The work of Chimajiappa.
2. Write in brief about Tipu Sultan.
3. Explain Shivaji Maharaj’s policy regarding the army .

CIVICS

Q6. Fill in the blanks.

(4)

1. _____ was not a member of the Constituent Assembly. (Sarojini Naidu, Sardar Vallabhai Patel, Mahatama Gandhi)
- 2.We the people of India are the _____ words of the Preamble.(ending ,opening ,official)
- 3.Concurrent List consists of _____ subjects.(97, 66 ,47)
- 4.The Constitution has abolished _____ that create an artificial hierarchy.(untouchability,cast ,titles)

Q7. True or False with reasons. (any 2)

(4)

1. Protection from unlawful arrest and detention is called Mandamus.
2. There are five types of Justice.
3. No one gets rights at birth.
4. The Union Territories are controlled by the State Government.

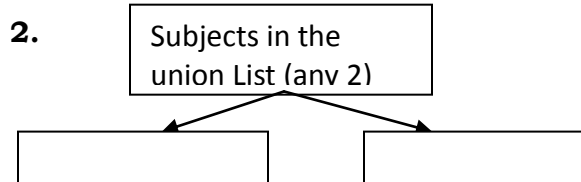
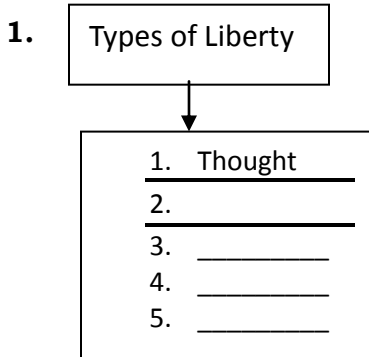
Q8. A. Short Notes. (any 2)

(4)

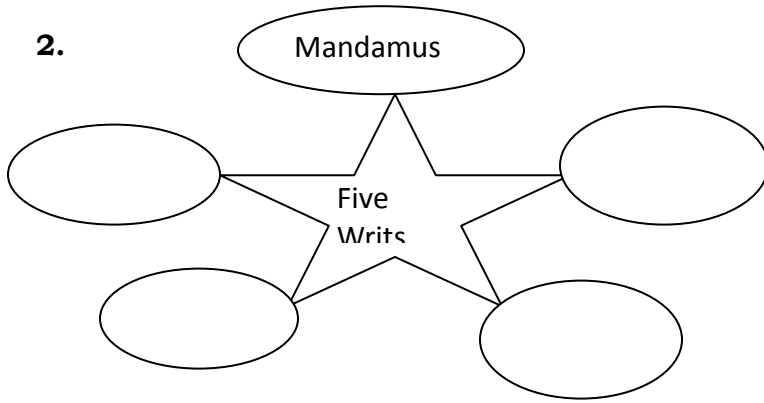
1. Single Citizenship.
2. Cultural and Educational Rights.
3. Civil honours that are conferred by the government.

Q8. B. Complete the following concept maps. (any 2)

(4)



2.



Q9. Answer in brief. (any 2)

(4)

1. Write about the Union Territories.
2. Why has the Constitution abolished titles?
3. What is meant by Right to Constitutional Remedies?

Best Of Luck

II Term Exam 2018- 2019

Subject: Maths.

Name: _____ STD: VII Div: _____ Roll No: _____

Marks: 80

Date: 4/01/2019

Time: 2hr.45mins

QI A) Solve the following (Any 8)

(8)

- 1) Write two divisions of integers such that the fractional form of each will be $\frac{7}{9}$
- 2) Find the HCF of 16,27
- 3) Find the measure of the complement of an angle of measure 80°
- 4) Write rational number $\frac{4}{3}$ in decimal form.
- 5) Simplify the expression $(38 - 8) \times 2 \div 5 + 13$
- 6) Find the value of $(\frac{4}{5})^3$
- 7) Find the Prime factors of 32
- 8) Which number is neither a Prime number nor a composite number?
- 9) Find the multiplicative inverse of $\frac{2}{5}$.

QI B) Solve the following (Any 4)

(8)

- 1) Find the Square root of the number 225.
- 2) Define Pythagoras theorem.
- 3) If the circumference of a circle is 176 cm, Find its radius .
- 4) Solve ; $6x - 1 = 3x + 8$
- 5) Draw the pairs of angles as described below.If that is not possible, say why?
 - a) Complementary angles which are not adjacent
 - b) Angles which are neither complementary nor adjacent.

QIIA) Choose the correct alternative for those given below and Rewrite it.

(8)

- 1) The point of concurrence of perpendicular bisectors of a triangle is called as-----
 - a) Circumcenter
 - b) apex
 - c) incentre
 - d) centroid
- 2) The square root of one is -----
 - a) 3
 - b) 4
 - c) 2
 - d) 1
- 3) Every triangle has ----- altitudes .
 - a) 2
 - b) 3
 - c) 4
 - d) 5
- 4) $p^4 \times p^4 =$ -----
 - a) p^8
 - b) p^{16}
 - c) P
 - d) none
- 5) Average of 0 and 5 is -----
 - a) 1
 - b) 5
 - c) 3.5
 - d) 2.5
- 6) In ΔPQR , $\angle Q = 90^\circ$, then the hypotenuse is -----
 - a) None
 - b) Side QR
 - c) Side PQ
 - d) Side PR
- 7) $(2a + 3) \times 5x = 10ax +$ -----
 - a) $17x$
 - b) $16x$
 - c) $15x$
 - d) None
- 8) Add: $9p + 16q$; $13p + 2q =$ -----
 - a) $22p + 18q$
 - b) $22q + 18p$
 - c) $9p + 16q$
 - d) None

QII B) Solve the following (any 4)

(8)

- 1) Find the HCF and LCM of 24 and 32 . Verify that their product is equal to the product of the given numbers.
- 2) Find the square root of 625 by factorization method.
- 3) Construct an equilateral triangle with side 4 cm.
- 4) Solve : a) $84 \div 70$ (b) $98 \div (-28)$
- 5) Find the LCM of 4,18,30

QIII A) Solve the following (any 4)

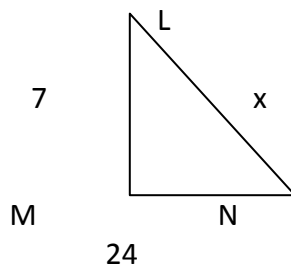
(8)

- 1) $(a + 30)^\circ$ and $2a^\circ$ are the measures of complementary angles .Find the value of **a** and the measures of each angle .
- 2) Carry out the following Subtractions involving rational numbers a) $\frac{7}{11} - \frac{3}{7}$ b) $\frac{11}{17} - \frac{13}{19}$
- 3) Simplify : a) $()^5$ b) $a^6 \div a^4$
- 4) Multiply : $(4x + 5y) \times (9x + 7y)$
- 5) The sum of two consecutive natural numbers is 69 .Find the numbers.

QIII B) Solve the following (any 4)

(8)

- 12 quintals of soyabean costs Rs 36,000. What is the cost of 8 quintals of soya bean?
- Aakash deposited 25000 rupees in a bank at a rate of 8 p.c.p.a for 3 years . How much interest does he get every year ? How much, altogether ?
- The wheel of a bullock cart has a diameter of 1.4 m .How many rotations will the wheel complete as the cart travels 1.1 km ?
- In the given figure , find the value of x



- The length of a rectangle is $(9x + 7)$ cm and its breadth is $(6x + 2)$ cm .Find its area.

QIV) Solve the following (any 6)

(18)

- When planting a forest the number of jambhul trees planted was greater than the number of Ashoka trees by 60.If there are altogether 200 trees of these two types ,how many jambhul trees were planted?
- Abdul ,Sejal and Soham each gave sayali 30 rupees ,70 rupees and 50 rupees respectively. Sayali put in 150 rupees and bought paper,colours etc.Together they made greeting cards and sold them all.If they made a total profit of 420 rupees .What was each one's share in the profit.?
- Javed deposited 12000 rupees at 9 p.c.p.a in a bank for some years and withdrew his interest every year.At the end of the Period ,he had received altogether 17400 rupees. For how many years had he deposited his money?
- Mohanrao took 10 days to finish a book ,reading 40 pages every day .How many Pages must he read in a day to finish it in 8 days ?
- Suresh and Ramesh together invested 144000 rupees in the ratio 4:5 and bought a plot of land . After some years they sold it at a Profit of 20 % p.a . What is the Profit each of them got ?
- IF $m\angle A = 70^\circ$, What is the measure of the supplement of the complement of $\angle A$?
- Find the LCM and HCF Of 15, 45 and 105

QV) Solve the following.(any 2)

(8)

- The table below shows the number of people who had the different juices at a juice bar on a Saturday and a Sunday .Draw a joint bar graph for this data.

Fruits	Sweet Lime	Orange	Apple	Pineapple
Saturday	43	30	56	40
Sunday	59	65	78	67

- Rajni deposited Rs. 13,000 in a bank at the rate of 9 p.c.p.a .She collected Rs. 1170 as interest at the end of the period . For how many years had she deposited the money?
- If 4 labourers build a wall in 8 days , how many days will 16 labourers take to build the same wall..

QVI) Solve the following (any 2)

(6)

- The top of a ladder of length 15 m reaches a window 9m above the ground .what is the distance between the foot of the ladder and the base of the wall ?
- A dice was thrown 40 times and the number on the upper face noted is given below. Draw up a frequency table for this data.
3 , 2 , 5, 6, 4, 2, 3, 1, 6, 6, 2 , 3, 5, 3, 5, 3, 4 , 2, 4 , 5, 4, 2, 6, 3, 3, 2, 4, 3, 3, 4, 1, 4, 3, 3, 2, 2 , 5 , 3, 3, 4
- The difference between the measures of the two angles of a complementary pair is 40° .Find the measures of the two angles.

Thakur Educational Trust's (Regd)
THAKUR VIDYA MANDIR HIGH SCHOOL & JR.COLLEGE
II-Term Re- Exam 2018- 2019

Subject: Science.

Name: _____

STD: VII Div: _____

Roll No: _____

Marks: 80

Date: 27/02/2019

Time: 2hr 45 mins.

SECTION I

QI) A) a) Do as directed :

(5)

- i. State the S.I. unit of Force.
- ii. Speed is a _____ quantity.
- iii. Give two examples of bad conductors of heat.
- iv. Identify the change:
 - 1) Ripening of fruits
 - 2) Melting of wax

B) Choose the correct alternative and rewrite the sentence.

(5)

- i. When an object comes back to the point of origin , its displacement is _____.
 - a) Constant
 - b) Increasing
 - c) Decreasing
 - d) Zero
- ii. The unit of speed is _____.
 - a) Metre/second
 - b) Kilogram
 - c) Metre
 - d) Gram
- iii. The symbol of Mercury is _____.
 - a) Hg
 - b) Mu
 - c) W
 - d) Me
- iv. A lightning conductor is made of a _____ strip.
 - a) Copper
 - b) Iron
 - c) Nickel
 - d) Aluminium
- v. _____ showed that lightning is a form of electric charge.
 - a) Thomas Browne
 - b) Thales
 - c) Benjamin Franklin
 - d) Gilbert

QII) Attempt the following questions (Any 5):

(10)

- i. The velocity of a car increases from 50m/s to 70m/s in 5 seconds . Find its acceleration?
- ii. When it is said that particular object is electrically neutral?
- iii. What is the symbol of Tungsten?How was the symbol derived?Where the tungsten is used?
- iv. A) What is meant by occultation?
B) Where does the event of Zero Shadow Day occurs?
- v. Why while purchasing the canned food ,its expiry date should be checked?
- vi. Write the definitions of :- a) Time period of oscillation b) Oscillatory motion
- vii. Why there is a gap at the joints of rails and of cement concrete bridges?

QIII) Attempt the following questions (Any 5):

(15)

- i. State the definition of velocity, its formula and unit.
- ii. a) How are charges generated?
 - a) If a glass rod is rubbed against a silk cloth , what kind of electric charge is developed on the glass rod?
- iii. Explain lunar eclipse with the help of neat and labelled diagram?
- iv. Distinguish between compounds and mixtures?.
- v. a) Where the method of separating funnel used?
b) Which precautions you will take while using the method of separating funnel?
- vi. Write the uses of ultrasonic sound.
- vii. Why is mercury or alcohol used in thermometer?

QIV) Attempt the following questions (Any 1):

(5)

- 1) Explain the functioning of the thermos flask with the help of neat and labelled diagram.
- 2) A) Distinguish between metals and non-metals.
B) What is an alloy? Give examples.

SECTION II

QV)A) Do as directed:

(5)

- i. The substance in which solute dissolves is called _____.
- ii. Name the microscopic openings on the leaves through which plants take up carbon-dioxide..
- iii. Find the odd man out : Drought, heavy rains, storms, tsunami.
- iv. Complete the table:

Food stuff	Adulterant
1) Turmeric	a) _____
2) Honey	b) _____
3) Rawa	c) _____
4) Ice-cream	d) _____

B) Choose the correct alternative and rewrite the sentence.

(5)

- i. _____ is required for the production of hormones.
a) Nitrogen b) Phosphorus c) Potassium d) Manganese and zinc
- ii. _____ means the utilization of absorbed food.
a) Digestion b) Ingestion c) Absorption d) Assimilation
- iii. _____ soil has highest capacity for holding water.
a) Sandy b) Silt c) Clay d) Shadu
- iv. _____ is the property of soil.
a) Plasticity b) Excretion c) Scattering of light d) Reflection
- v. The muscles of the back side of upper arm are called _____.
a) Biceps b) Triceps c) Quadriceps d) Deltoid

QVI) Attempt the following questions (Any 5):

(10)

- i. Draw neat and well labelled diagram to show the different parts of leaf.
- ii. Name the different types of teeth. What is the function of each type?
- iii. Distinguish between soap and synthetic detergents.
- iv. Why we should not consume adulterated food ?
- v. What are the remedial measures for the calamity famine?
- vi. Why is camel called the ' Ship of the desert ' ?
- vii. A) Explain the pasteurization method of food preservation?
B) Name the organizations that look after food safety.

QVII) Attempt the following questions (Any 5):

(15)

- i. Define adaptation? What are the adaptations found in aquatic plants?
- ii. What are the functions of various parts of plant?
- iii. What are the disastrous effect of tsunami ?
- iv. Why oil and water form a homogenous mixture when sufficient quantity of detergent is added?
- v. A) What do you mean by voluntary and involuntary muscles?
B) What would happen if, cardiac muscles do not move?
- vi. What is meant by quantitative wastage of food? How does quantitative wastage of food takes place?
- vii. What are the remedial measures for the calamity Lightning strike?

QVIII) Attempt the following questions (Any 1):

(5)

- i. How does the food spoilage occur? Which are the various factors spoiling the food?
- ii. Describe the process of digestion of food.

All the best

SCIENCE I

QI) A) a) Do as directed :

(5)

- v. _____ is the rate of change of velocity with respect to time.
- vi. Write the S.I. unit of work.
- vii. Give two examples of good conductors of heat.
- viii. Identify the change:
 - 3) Bursting of crackers
 - 4) Melting of ice

B) Choose the correct alternative and rewrite the sentence.

(5)

- vi. _____ is a vector quantity.
 - b) Length b) Breadth c) Mass d) Weight
- vii. The unit of velocity is _____.
 - b) Metre/second b) Kilogram c) Metre d) Gram
- viii. The symbol of tungsten is _____.
 - b) T b) Tu c) W d) Tn
- ix. A lightning conductor is made of a _____ strip.
 - b) Copper b) Iron c) Nickel d) Aluminium
- x. Velocity at a particular moment of time is called _____.
 - b) Average velocity b) Speed c) Distance d) Instantaneous velocity

QII) Attempt the following questions (Any 5):

(10)

- viii. Distinguish between distance and displacement.
- ix. When it is that particular object is electrically neutral?
- x. What are the molecular formulae of the following compounds:
 - c) Sodium chloride b) Glucose c) Hydrochloric acid d) Methane
- xi. When the sun rises, surroundings appear illuminated, why?
- xii. Write the definitions of :- a) Amplitude b) Frequency
- xiii. The frequency of an oscillator is 4 Hz . What will be the time period of oscillation for that oscillator?
- xiv. What is corrosion and what are the factors that cause corrosion?

QIII) Attempt the following questions (Any 5):

(15)

- viii. A person travels a distance of 72km in 4 hours .Calculate the average speed in m/s ?
- ix. a) In the lightning conductor what provision is made for spreading the electricity into ground?
d) If a glass rod is rubbed against a silk cloth , what kind of electric charge is developed on the cloth?
- x. Explain solar eclipse with the help of neat and labelled diagram?
- xi. Distinguish between metals and non-metals.
- xii. a) For what purpose distilled water is used?
c) Which precautions you will take while using the method of distillation?
- xiii. What are the types of sound based on frequency of sound?
- xiv. Why do concrete roads have gaps filled with tar?

QIV) Attempt the following questions (Any 1):

(5)

- 3) Explain the construction of the thermos flask with the help of neat and labelled diagram.
- 4) How are the components of mixture separated by simple methods? (Any 5 methods)

SCIENCE II

QV)A) Do as directed:

(5)

- v. The _____ pressure is same in all directions.
- vi. Name the bacterium which absorb atmospheric nitrogen and convert it into its compound.
- vii. Find the odd man out : Famine, earthquake, cloudburst, war
- viii. Complete the table:

Food stuff	Adulterant
5) Turmeric	e) _____
6) Black pepper	f) _____
7) _____	g) Iron filings

B) Choose the correct alternative and rewrite the sentence.**(5)**

- vi. _____ is the important component of proteins and chlorophyll.
 a) Nitrogen b) Phosphorus c) Potassium d) zinc
- vii. _____ is an insectivorous plant.
 a) Mushroom b) Lichen c) Drosera d) Cuscuta
- viii. _____ soil has low capacity for holding water.
 a) Sandy b) Silt c) Clay d) Shadu
- ix. The formula of density is _____.
 a) Mass/ Volume b) Mass-Volume c) Volume/Mass d) Mass×Volume
- x. The muscles of the front side of upper arm are called _____.
 a) Biceps b) Triceps c) Quadriceps d) Deltoid

QVI) Attempt the following questions (Any 5):**(10)**

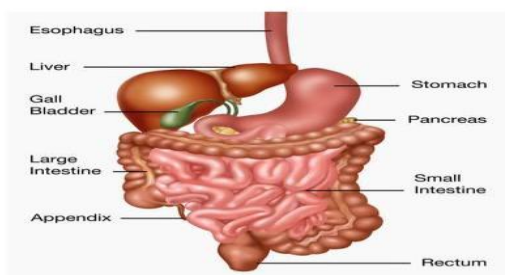
- viii. a) Explain Darwin's theory of survival of the fittest.
 b) Write scientific name of : Humans beings and Mango
- ix. Draw neat and well labelled diagram to show the different parts of stem.
- x. a) When is World Health Day celebrated?
 b) What is the study of muscles known as?
 c) Which muscles work under our will ?
 d) Which type of muscles are present in blood vessels and utreus?
- xi. How will you check with the help of soap powder whether water is hard or not?
- xii. How is milk pasteurized?
- xiii. Why food remains safe at 5°C?
- xiv. What are the remedial measures for the calamity storm?

QVII) Attempt the following questions (Any 5):**(15)**

- viii. How is frog adapted to amphibious habitat? Why is it called an amphibian?
- ix. What are the different types of roots?
- x. What is tsunami? What gives rise to tsunami?
- xi. Distinguish between Natural detergents and Man-made detergents.
- xii. What measures will you take for preventing food wastage?
- xiii. What are the causes of famine?
- xiv. What soluble nutrients are formed after digestion of food?

QVII) Attempt the following questions (Any 1):**(5)**

- iii. Describe the various methods of food preservation. (any 5 methods)
- iv. a) Label the parts A,B,C,D of digestive system.



- b) Describe the function of stomach and small intestine in digestion of food.

All the best