

Thakur Educational Trust's (Regd.)
THAKUR VIDYA MANDIR HIGH SCHOOL & JR.COLLEGE
III TERMINAL EXAMINATION 2018- 2019

Subject: ENGLISH

Name: _____ Std: VIII Div: _____

Roll No: _____

Marks: 100

Date: 14/03/2019

Time: 3hrs

Q. I) A 1 Grammar : Do as Directed

(8)

1. The priest ----- (gifted) the plate of gold to the man(Use the Simple Future tense of the verb in the bracket and rewrite the sentence) (1)
2. You shall judge yourself. (Underline the pronouns) (1)
3. He mastered all the branches of learning. (Add a Question Tag) (1)
4. I had to prepare the ornaments for the bride. (Pick out the verb and state whether it is Transitive or Intransitive) (1)
5. He came quite far on the narrow track.(State the Part of Speech of the underlined words) (1)
6. Dick lived in a small village .(State the kinds of Nouns the underlined words are) (1)
7. Revathi played her favourite tune. (Pick out the Subject and Predicate) (1)
8. The king made no answer. (State whether the underlined is an Object or Complement) (1)

Q I A 2 Grammar : Do as Directed :

(8)

1. How happily she played the violin!.(Make it Assertive) (2)
2. Frame a meaningful sentence by using the phrase ' around the corner ' (2)
3. King Brahmadata decided to turn back. (Frame a wh Question to get the underlined part as the answer) (2)
4. Tell him you can't come (Rewrite using 'unable'). (2)

Q I B) Grammar: Do as Directed :-

(4)

1. He lighted the lamp again. (Rewrite Beginning with ' the lamp.....') (1)
2. Teacher said, "Be quiet students." (Rewrite into the Reported Speech) (1)
3. The King will not hang me. (Change the Voice.) (1)
4. Shakespeare is the greatest writer in English.(Change the degrees of Comparison) (1)

Q . 2. A Read the following passage and do the activities:

(10)

A. 1 Answer the following in one or two words:-

(2)

- a) Who are the two speakers in the passage below?
- b) Name the scholarly Pundit mentioned in the passage.

Mantriji: (Standing up and bowing) Your Royal Highness, I have some urgent news to convey. May I have your kind permission To announce it?

Emperor: Yes Mantriji, you may.

Mantriji: Maharaj, a very great scholarly Pundit – Pundit Shahane has arrived here. He has mastered all our **scriptures** And has won great **renown** all over India.

Emperor :He must be a truly great Pundit.

Mantriji :Very true Maharaj! What's more, Pundit Shahane has come here to challenge all the Pundits in our kingdom. He is visiting our court tomorrow.

(All Courtiers, Pundits etc, begin to show their nervousness and appear restless.)

A 2 . 1 What urgent news had the Mantri to convey to the Emperor? (1)

2 Which line in the above passage says that the Mantri was a humble man? (1)

A 3. 1 Find words from the passage which mean the following: (1)

- a) Well-known b) sacred writings

A.3. 2 Write the noun forms of:- (1)

- a) great b) appear

A 4. a) May I have your kind permission to announce it?

(State the function of the underlined Modal Auxiliary) (1)

B) He must be a truly great Pundit. (Rewrite as an Exclamatory sentence) (1)

A 5.What kind of a person according to you is the Emperor as mentioned in the above extract ? (2)

Q. 2 B Read the following passage and do the activities:

(10)

B. 1 State whether the following sentences are True or False. (2)

1. Uttarayana starts from MakarSankranti onwards.
2. The desire of human beings to fly probably led to the invention of kites

Kite -flying has a long history. There are many Greek, Indian and other mythological stories which tell us about human beings wanting to or trying to fly. Over a period of time, this desire of humans and their imagination probably led to the invention of kites. And it is likely that the box-kites, designed more than a hundred years ago, later inspired others to create power-driven aeroplanes.

In India, however, the tradition of kite-flying has not changed. Be it during the coming of Spring which is celebrated as Basant or during the festival of MakarSankranti, people of all ages go out into the open to try their luck with their kites. In towns and cities, where open spaces are difficult to find, terraces and rooftops are often used for this traditional sport.

B 2. 1)What probably was the main reason for the invention of kites? (1)

2) Write the names of two festivals mentioned in the above passage. (1)

B 3. 1)Write words from the passage which mean the following: (1)

a) Traditional, based on myths b) customs or beliefs

2) Write the Antonyms of : (1)

1. difficult 2. traditional

B 4 Grammar:

1) Terraces and rooftops are often used for this traditional sport. (Change the Voice) (1)

2) Kite-flying has a long history. (State whether the sentence is Simple, Compound or Complex) (1)

B5What do you think is the main reason why kite-flying is neglected nowadays? (2)

3 A Read the following and extract do the activities:-: (5)

A1 Complete the following:- (2)

a)The honey bees teach us _____

b)The merchant bees _____

So work the honey-bees, creatures that

By a rule in nature teach

The art of order to a peopled kingdom,

They have a King and officers of sorts;

Where some, like magistrates, correct at home;

Others, like merchants, venture trade abroad;

Others, like soldiers, armed in their stings;

Make boot upon the summer's velvet buds;

Which pillage they with merry march bring home.

A2 a) What work is done by the magistrate bees? (1)

A3 Write your own rhyming word to the following a) teach b) art (1)

A4Which pillage they with merry march bring home. (Name and Explain the Figure of Speech) (1)

Q. 3 B Read the following extract carefully and write the Appreciation of the poem (10).

(You may use the following points: * Title, *Poet, *Rhyme scheme, *Favourite line, *Theme, *Figure of Speech, *Type of the poem-At least 5 to 6 lines, *Why I like /don't like the poem.)

What is this life if full of care,
We have no time to stand and stare?

No time to stand beneath the **boughs**
And stare as long as sheep or cows?

No time to see when woods we pass
Where squirrels hide their nuts in grass?

No time to see in broad daylight,
Streams full of stars, like skies at night

No time to turn at **Beauty's** glance,
And watch her feet, how they can dance?

No time to wait till her mouth can
Enrich that smile her eyes began?

A poor life this if, full of care,
We have no time to stand and stare.

Q.4 Read the following passage carefully and do the activities (10)

A1 Fill in the blanks using the correct word from the passage:- (2)

- 1 If you don't have at least _____ hours of sleep each night, over time, your _____ will suffer.
2. People who adopt a _____ sleep pattern generally have a stronger _____

Do you wake up feeling fresh and alert in the morning or do you drag yourself out of bed most of the time? If you don't have at least eight hours of sleep each night, over time, your health will suffer.

Missing an hour or two of sleep for a few days will have an effect on your concentration and performance. However, sleeping more than the recommended hours does not necessarily mean that you will do better or accomplish more. Rather, oversleeping is quite similar to overeating. It makes you feel lethargic and your concentration span becomes shorter too.

Having at least eight hours of sleep boosts our immunity. People who adopt a good night's sleep pattern generally have a stronger immunity. For many, especially women, compromising on their beauty, sleep is impossible. When you sleep, your body repairs and regenerates skin, blood and brain cells. Our skin glows and our hair shine when we have enough sleep. People who are deprived of sleep usually have dark rings under their eyes.

A.2 a) What is the passage mainly about? (1)

b) What does the writer compare oversleeping to? (1)

A.3 a) Frame a meaningful sentence of your own using the phrase 'to have an effect on' (1)

b) Write the adjective forms of : -

a) effect b) health (1)

A.4 Grammar:-

a) People who adopt a good night's sleep pattern generally have a stronger immunity. (Change to a Simple sentence) (1)

b) People who are deprived of sleep usually have dark rings under their eyes. (1)

(Pick out the Main clause and the Subordinate clause)

A.5 Do you agree with the above passage ? Give your opinion about it. (2)

Q.4 B Read the passage 4A carefully and write a Summary/Precis on it of about 100-120 words. (5)

Q.5 A Letter-Writing (Informal/Formal) (5)

A.1 Imagine this vacation your family has decided to visit Mahabaleshwar. Write a letter to your friend telling him/her about it.

OR

A.2 Your locality has been suffering from bad roads and poor street lights from past one month. It has caused a lot of hardships to the residents. Write a letter to the Mayor complaining about the same.

Q.5 B Dialogue Writing / Interview Writing (5)

5. B.1 Write a dialogue between a teacher and student on the ' Importance of Discipline.'

OR

5.B.2 Imagine You have visited a popular Music Academy Theatre and there you met a well-known sitarist Pandit Shri Ravi Shankar. Frame 10 questions that you would like to ask him.

Q.6 Information Transfer/ Fact file (5)

6. A.1 Read the passage given below and transfer it into a Tabular form

The earliest festival in India is Holi which is the festival of colours celebrated by specific groups of individuals who smear colours on each other and throw water balloons filled with coloured water. After Holi we celebrate Gokul Ashtami. It is the birthday of Lord Krishna. Sri Krishna is worshipped and on the next day we have the Handi breaking which is rough and risky. Next we have the most important festival Ganesh Chaturthi which is widely celebrated. Idols of Lord Ganesha are bought and after poojas, these idols are immersed on the 2nd, 5th, 7th or 10th day. Dassera is a ten day festival. Goddess Bhavani Mata is worshipped. On the 10th day the idol is immersed. This festival symbolizes victory of good over the evil. Then follows Diwali, the festival of lights characterized by sweets, crackers and fire works. Along with this comes the Hindu New Year. This is a noisy festival.

Festival	Time	God/Goddess	Type of festival

OR

6 A 2 Prepare a Fact file to visit a Tourist place of Interest of your choice.

Q.6 B. Report Writing:-

(5)

6.B 1 Imagine an Inter-school Elocution Competition was held in your school. Write a Report on it of about 20 lines for your school magazine.

OR

6.B.2 Imagine you have helped your teachers in implementing the Literacy programme in your area as a part of Social service . Almost all the illiterates have been taught. The students of other schools want to know the methods you adopted in this campaign. Write a Report for the Newspaper in about 20 lines, how it worked out.

Q. 7 A 1 Expand the following (Any one)

(5)

- a) Service to man is service to God.
- b) It is never too late to mend.

OR

7 A 2 Develop a story wherein any of the above expansion should be the moral of the story.

Q. 7 B 1 Write a Speech on : (Any one)

(5)

1. Importance of Trees
2. Role of Newspapers in our lives.

OR

7 B 2 Prepare a Counterview on the following topic:-

Many hands make light work

Every individual must realise that any amount of work that one has can only be done with a proper planning. The work can be distributed among many people. Be it a project such a Notice-board decoration or any class activity . The more the merrier, whatever amount of work can be done in no time by all the members involved in the group. Every individual shows his team-spirit ,listening skills and understanding and hence the work is accomplished.

Thakur Educational Trust's (Regd.)
THAKUR VIDYA MANDIR HIGH SCHOOL & JR.COLLEGE
 III Term Exam 2018- 2019
 Subject: Geography.

Name: _____ STD: VIII Div: _____ Roll No: _____
 Marks: 40 Date: 15/03/ 2019 Time: 2 Hrs.

QI) Choose the correct option and complete the sentence: - (4)

1. Below the crust lies the _____.
 (Core/ Mantle/ Inner core)
2. Cloudburst is common in the _____ state.
 (Uttarakhand/ Jharkhand/ Maharashtra)
3. Land submerged below oceanic water is called the _____.
 (Under water relief/ marine plains/ ocean floor)
4. In _____ Ocean the Labrador Current flow.
 (Pacific/ Indian/North Atlantic)

QII) Match the following: - (4)

- | A | B |
|------------------------------|----------------------|
| 1. Cumulonimbus | - Warm Current |
| 2. Gulf stream | - Relief and climate |
| 3. Physical | - More details |
| 4. Large scale map | - Low altitude |
| - Vertical extent in the sky | |

QIII) State whether the statements are right or wrong. Correct the wrong ones (4)

1. The density of various materials is not the same in the interior of the earth.
2. Weather in Mumbai is hot and dry due to coastal location.
3. The movement of icebergs is not dangerous for water transport.
4. There are six ways of expressing the scale on map.

QIVA) Answer in one sentence each: - (4)

1. How are the igneous rocks formed?
2. What are the factors affecting the rate of evaporation?
3. What is verbal scale?
4. During field visit, how will you obtain various types of information?

QIVB) Differentiate between: - (Any 1) (2)

1. Agro-based industries and Information technology industries.
2. Large scale map and Small scale map.

QVA) Look at the given table and answer the following questions (4)

COUNTRY	PERCENTAGE OF IMMIGRANT POPULATION
Kuwait	62.11
Bangladesh	0.73
Germany	12.31
Hong Kong	42.59
Israel	37.87
India	0.52
Oman	24.46
Saudi Arabia	25.25
Great Britain	8.98
U S A	12.81

1. Which countries have less than 10% migrant population?
2. Which are the countries with a migrant population of between 10% to 20%?
3. Name the countries with a migrant population of more than 20 %.

4. Find the reason behind the migrant population of more than 20 %.

QVB) Mark the following on the given outline map of India.

(4)

1. Arabian sea
2. Tamil Nadu
3. Jammu and Kashmir
4. Maharashtra

QVI) Give geographical reasons: - (Any 3)

(6)

1. The continental shelf is a paradise for fishing activity.
2. The currents originating in Equator warm up the coastal area they pass through..
3. The record of the ownership of non- agricultural land is the same as that of the agricultural land.
4. India is looked upon as a young country. .

QVII) Answer in brief (Any 2)

(8)

1. Differentiate between 7/12 extract and property card.
2. Explain the factors affecting industrial development.
3. Outline the importance of field visit.

ALL THE BEST

ठाकुर वदया मंदिर हाई स्कूल एवम जूनियर कॉलेज

तृतीय सत्र परीक्षा 2018-19

कक्षा : आठवीं

वषय-हिंदी

पूर्णांक:100

दिनांक:16/03/2019

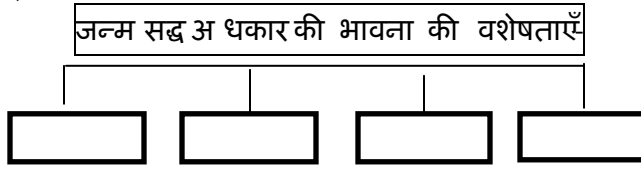
समय:3 घंटे

गद्य वभाग

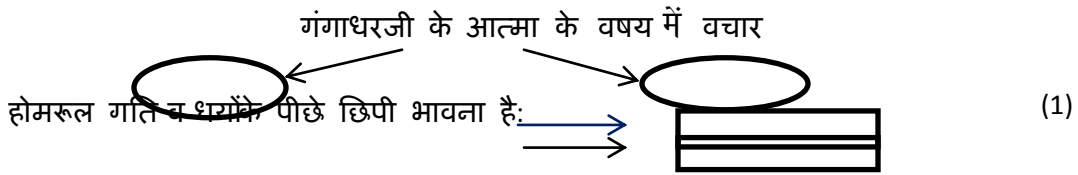
प्रश्ना. अ निम्न ल खतपठित परिच्छेद पढकर सूचना के अनुसार कृतियां कीजिए:-

अब मैं जो कुछ बोलने जा रहा हूँ, वह चर युवा है। शरीर बूढ़ा-जर्जर हो सकता है और नष्ट भी हो सकता है, परंतु आत्मा अमर है। उसी प्रकार, हमारी होमरूल गति व धर्योंमें भले ही सुस्ती दिखाई दे, उसके पीछे छिपी भावना अमर एवं अ वनाशी है। वही हमें स्वतंत्रता दिलाएगी। आत्मा ही परमात्मा है और मन को तब तक शांति नहीं मलेगी, जब तक वह ईश्वर से एकाकार न हो जाए। स्वराज्य मेरा जन्म सद्द अ धकार है। जब तक वह मेरे भीतर जाग्रत है, मैं बूढ़ा नहीं हूँ कोई ह थयार इस भवन को काट नहीं सकता, कोई आग इसे जला नहीं सकती, कोई जल इसे भगो नहीं सकता, कोई हवा इसे सुखा नहीं सकती।

1. संजाल पूर्ण कीजिए:- (2)



2. आकृति पूर्ण कीजिए:- (1)



3.1 अनेक शब्दों के लए एक शब्द ल खए (1)

1. जो मरता नहीं - []

2. सब के साथ घुल मल जाना []

3.2 वरुधार्थी शब्द ल खए। (1)

1 वनाशी -----

2 स्वतंत्रता -----

4. होमरूल पर अपने वचार ल खए (2)

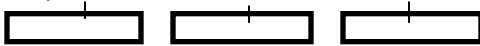
प्रश्ना आ निम्न ल खतपठित परिच्छेद पढकर सूचना के अनुसार कृतियां कीजिए:-

रोशनी होते न होते जूह की तैयारी चरम सीमा पर पहुँच गई। स्टोव को भी आज ही धोखा देना था। वह हर मिनट बुझने लगा। आधा घंटा उसमें तेल भरने, धौकनी करने में चला गया। आ खर चाय का प्रोग्राम स्थ गत कर दिया गया और हम दत्त चत्त हो तैयारी में जुट गए। वाटरलू जाने से पहले नेपो लयन ने भी ऐसी तैयारी न की होगी।

ऐसी महत योजनाओं के सम्पन्न करने में हम पति-पत्नी परस्पर सहयोग भावना से काम करने पर वश्वास रखते हैं। सहयोग भावना हमारे जीवन का मूलमंत्र है। सहयोग, मन, वचन, कर्म इन तीनों से होता है। जीवन का मूलमंत्र, मुझे भूला न था। श्रीमती जी मुझे मेरे कामों की याद दिलाने लगीं और मैं उनके उपकार के बदले उनकी चंताओं में हाथ बंटाने लगा। मैंने याद दिलाया---पू डर्यों के साथ मर्ची का अचार जरूर रख लेना।

1. संजाल पूर्ण कीजिए। (2)

1. सहयोग इन तीन तत्वों से होता है---



2. यह स्थ गत कया गया---- []

2. निम्न ल खतवाक्यो को उ चत क्रम मे लगाइए। (2)

1) हम दत्त चत्त हो तैयारी में जुट गए।

2) नेपो लयन ने भी ऐसी तैयारी नहीं की थी।

3) स्टोव को भी आज ही धोखा देना था।

4) तैयारी चरम सीमा पर पहुँच गई।

3.1 समानार्थी शब्द ल खए। (1)

स्थ गत ----- 2 परस्पर-----

3.2 इन शब्दों से वाक्य बनाइए। (1)

1 रोशनी ----- 2 उपकार-----

4. पति - पत्नी में सहयोग रहना आवश्यक है-अपने वचार ल खए। (2)

प्रश्न1 इ निम्न ल खतअपठित परिच्छेद पढ़कर सूचना के अनुसार कृतियां कीजिए।

भ्रष्टाचार का अर्थ है, दूषित आचरण या बेईमानी । आज यह बेईमानी हर क्षेत्र में व्याप्त है सरकारी कार्यालयों, बीमा कंपनियों, बैंको आयकर वभाग के कार्यालयों में खुले आम भ्रष्टाचार होता है। शक्षाखेल तथा च कत्सा के क्षेत्रों में भ्रष्टाचार की काली छाया फैली हुई है ।

भ्रष्टाचार फैलने का एक कारण है, हमारे देश की चुनाव पद्धति । चुनाव जीतने के लए प्रत्याशी को पानी की तरह पैसा बहाना पड़ता है चुनाव में सफल होने पर वह खर्च की गई धनराश कसी भी तरह पाने के लए बैचन हो उठता है। लोग सांसारिक सुख -सुवधाओं को धर्म और सदाचार से अधिक महत्त्व देने लगे हैं। चारों तरफ धन बटोरने के लए धोखाधड़ी,छल-कपट आदि सभीप्रकार के अनुचत उपायों का सहारा लया जा रहा है।

1. संजाल पूर्ण कीजिए:- (2)

1. भ्रष्टाचार इन स्थानों पर होता है:
2. भ्रष्टाचार फैलने का कारण ये है:

2. आकृति पूर्ण कीजिए:- (2)

1. धन बटोरने के लए लोग ये करते हैं:
2. भ्रष्टाचार का अर्थ है:

3.1 पर्यायवाची शब्द ल खए (1)

3.2 1 पानी----- 2 आचरण----- (1)

परिच्छेद से दो प्रत्यय शब्द छाँटकर ल खए।

4. भ्रष्टाचार रोकने के उपाय पर अपने विचार लिखिए । (2)

पद्य वभाग

प्रश्न2 अ निम्न ल खतपठित पद्यांश के आधार पर सूचना के अनुसार कृतियां कीजिए:-

कलाकार-क व वर्ण-वर्ण को
भाव तूल से रच सम्मोहन
जब अरूप को नया रूप दे
भरते कृति में जीवन स्पंदन
नहीं प्रार्थना इससे प्रयतरा
सत्य- निष्ठ ,जन-भू प्रेमी जब
मानव जीवन के मंगल हित
कर देते उत्सर्ग प्राण निज
भू- रज को कर शोणतरंजित
नहीं प्रार्थना इससे बढकर।

1. आकृति पूर्ण कीजिए:- (2)

1. पद्यांश में उल्लिखत मानव के व भन्नरूप ल खए।

2. यह इनसे भाव भरते है। 1 कलाकार 2 क व

2. जोड़िया लगाइए। (2)

- | | |
|-----------|-----------|
| 1 कृति। | 1 प्राण |
| 2 उत्सर्ग | 2 रजित |
| 3 शो णत | 3 नया रूप |
| 4 अरूप | स्पंदन |

3. अंतिम चार पंक्तियों का भावार्थ ल खए। (2)
 प्रश्न2 आ निम्न ल खतक वताओंमें से कसी एक क वता का काव्य वश्लेषण निम्न मुद्दों के आधार पर ल खए।

- | | | |
|--------------------------------|-----------|-----|
| 1 अनमोलवाणी | 2 अंधायुग | (1) |
| 1. क व का नाम | | (1) |
| 2. रचना की वधा | | (1) |
| 3. पसंद की पंक्तियां | | (2) |
| 4. पंक्तियां पसंद होने का कारण | | |
| 5. रचना से प्राप्त संदेश | | |

प्रश्न 2 इ

निम्न ल खतअपठित पद्यांश को पढकर सूचना के अनुसार कृतियां कीजिए:-

मत डर प्रलय-झकोरों से तू
 बढ आशा-हलकोरों से तू
 क्षण में अरिदल मट जाएगा
 तेरे पंखों से पसकर।
 खग ,उडते रहना जीवन भर!
 यदि तू लौट पडेगा थककर,
 अंधड कालबवंडर से डर,
 प्यार तुझे करने वाले ही देखेंगे
 तुझको हंस-हंसकर
 खग ,उडते रहना जीवन भर!

1. आकृति पूर्ण कीजिए:- (1)

1.पक्षी को इनसे न डरने को कहा है।

2.क्षण में इससे पसकर ये मट जाएगा।

2. एक शब्द में उत्तर ल खए (2)

3. प्रथम चार पंक्तियों का भावार्थ ल खए। (2)

पूरक पठन

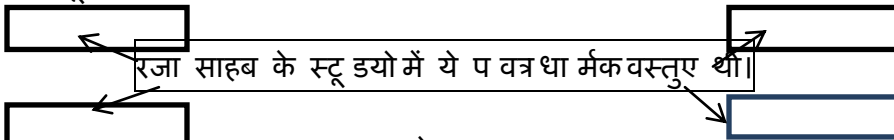
प्रश्न3 आ

निम्न ल खतपठित परिच्छेद पढकर सूचना के अनुसार कृतियां कीजिए:

रजा साहब अपनेधर्म के साथ-साथ उतने ही हिंदू और ईसाई भी थे।उनके स्टू डयो में गणपति की मूर्ति,क्रॉस, बाइबल, गीता,कुरान,उनकी माँ का एक फोटो,गांधीजी की आत्म कथा व भारत से लाई हुई मोगरे की कुछ सूखी मालाएँ ,सब एक साथ रखा रहता था।वे गणेश को पूजते थेऔर हर र ववार को सुबह चर्च भी जाते थे।

1. एक साथ रखा रहता था।वे गणेश को पूजते थेऔर हर र ववार को सुबह चर्च भी जाते थे। (2)

एक दिन जहांगीर आर्ट गैलरी में प्रदर्शनी देखते हुए कसी ने कहा,अरे यह तो एस.एच. रजा हैं। मैं एकदम सावधान हो गई क्यों क मेरी सूची में उनका भी नाम था। संजाल पूर्ण कीजिए:-



2. 'कला का महत्त्व:-' इस वषय पर अपने वचार ल खए। (2)

प्रश्न3 आ

निम्न ल खतपद्यांश पढकर सूचना के अनुसार कृतियां कीजिए:-

घना अंधेरा

चमकता प्रकाश

और अधक

करते जाओ

पाने की मत सोचो

जीवन सारा।

जीवन नैया

मंझधार में डोले

रंग-बिरंगे

रंग-संग लेकर

आया फागुन।

1. आकृति पूर्ण कीजिए:- (1)

1) हाइकु में प्रयुक्त महीना और उसकी ऋतु : (1)

2) हाइकु द्वारा मलने वाला संदेश : (2)

2. फागुन के महीने में प्रकृति रंगों से रंग जाती है। पर अपने वचार स्पष्ट कीजिए। (2)

व्याकरण

प्रश्न 4 सूचना के अनुसार कृतियां कीजिए:- (1)

1.1 अधोरेखांकित शब्द का भेद ल खए (1)

सौ ग्राम दही रोज खाओ

1.2 निम्न ल खतशब्द का अपने वाक्य में प्रयोग कीजिए:- (1)

गेहूँ (1)

2.1 रेखांकित अव्यय पहचान कर भेद ल खए (1)

2.2 चारों ओर अँधेरा छा गया। (1)

अव्यय का अपने वाक्य में प्रयोग कीजिए:-

3. अथवा (2)

सूचना के अनुसार काल-परिवर्तन करके वाक्य फर से ल खए

4. 1 वह दस गुना बढ़ गई थी। (सामान्य वर्तमान काल) (2)

2 मैं फर से को शश करूँगा। (अपूर्ण भूतकाल) (2)

तालिका पूर्ण कीजिए :

संधि	संधि विच्छेद	भेद
चंद्रोदय	----- + -----	-----
-----	तमः + गुण	-----

5.1 (1)

(1)

5.2 निम्निल खत वाक्य का रचना के अनुसार भेद ल खए

असल में बात यह हुई कि आदमी की जिंदगी आराम से कटने लगी। (1)

6.1 सूचना के अनुसार परिवर्तन कीजिए:- (1)

6.2 सुनील, झाड़वर को बुलाता है। (आज्ञार्थक) (1)

मुहावरे का अर्थ लखकर वाक्य में प्रयोग कीजिए-

गले लगाना

7. अधोरेखांकित वाक्यांश के लए उचित मुहावरे का चयन कर वाक्य फर से ल खए (2)

मा लकने मेरी खूब सहायता की।

(धुन सवार होना, हाथ बँटाना)

8. वाक्य शुद्ध करके फर से ल खए। (1)

1. जाता हो है पूर्ण भयावह

2. बंदगुल तो रख लुंगी। (1)

9. सहायक क्रिया पहचान कर ल खए

1) महोदय रिश्वत लेते पकड़े गए।

2) उच्च अधिकारी के पास शिकायत कर दी।

10. प्रथम व द्वितीय प्रेरणार्थक रूप ल खए (1)

क्रिया	प्रथम प्रेरणार्थक	द्वितीय प्रेरणार्थक
--------	-------------------	---------------------

11.

सुनना	_____	_____
-------	-------	-------

(1)

निम्न ल खतवराम चहनपहचानिए ओर भेद ल खए।

) 2 (!)

वाक्य में प्रयुक्त कारक पहचानकर भेद ल खए।

पेड़ पर सुंदर फूल खलने लगे।

रचना वभाग

प्रश्न 5अ

(5)

1.

निम्न ल खतमें से कसी एक वषय पर पत्रलेखन कीजिए:-

नितिन/नीता पाटील ,10,जवाहर वसाहत,अंधेरी(प.)मुम्बई सेअपने वद्यालय शवाजी वद्या मंदिर,वर्सावा, मुंबई के प्रधानाध्यापक के नाम स्कूल का मा सक शुल्क माफ करने के लए आवेदन पत्र लखता है। अथवा

2.

सुरेश /सुनीता बी/303 जवाहर बिल्डिंग, हनुमान नगर,कांदिवली (पूर्व) सेअपने मत्र आकाश/अनिता 01, माउली अपार्टमेंट , दत्तानी पार्क, कांदिवली (पूर्व) को पताजी की मृत्यु पर सान्त्वना देते हुए पत्र लखता/ लखती है।

निम्न ल खतपरिच्छेद पढकर पांच ऐसे प्रश्न तैयार कीजिए जिनके उत्तर एक-एक वाक्य में हो।

(5)

शक्षा मानव जीवन के वकास का प्रमुख आधार है । शक्षा वहीनव्यक्ति पशु के समान जीवनयापन करता है। व्यक्ति में अच्छे संस्कार शक्षा से ही आते है। शक्षा के माध्यम से व्यक्ति सामाजिक,आ र्थकराजनैतिक धा र्मक ज्ञान प्राप्त कर स्वयं तो अपना मार्ग बनाता ही है, साथ ही दूसरों का भी मार्गदर्शन करता है । शक्षा प्राप्त करना हर व्यक्ति का जन्म सद्द अ धकार है। नवीन पीढी अथवा बालक एवम नवयुवक तो शक्षा प्राप्त कर आगे बढ़ते रहे हैं। आवश्यकता है,प्रोढ को शक्षा देने की। अथवा 14 वर्ष की आयु से अ धकवाले वे सभी व्यक्ति जो अ श क्षतहैं।

आ

1.

अपने वदयालय में आयोजित वा र्षक खेलकूद समारोह का वृतांत लेखन कीजिए। (5)

2.

निम्न ल खतमुद्दों के आधार पर आकर्षक वज्ञापन तैयार कीजिए। (5)

व्ही . आई. पी. सूटकेस

हर आकार मे

हर रंग मे

सु वधाजनक

ले जाने मे हल्के

मजबूत पहिए

यात्रा को आसान बनाने के लए

संपर्क पता

भ्रमण ध्वनि

3.

निम्न ल खतमुद्दों के आधार पर कहानी ल खएकहानी का उ चत शीर्षक भी ल खए(5)

एक लालची आदमी-----कड़ी तपस्या करना-----देवता का प्रसन्न होना-----
वरदान-----दौड़कर जितनी जमीन घेरोगे,उतनी तुम्हारी-----दौड़ते रहना-----थककर
गरना-----मृत्यु-----सीख।

इ

कसी एक वषय पर निबंध ल खए

(7)

1.निरक्षरता एक अ भशाप

2. एक सैनिक की आत्मकथा

शुभकामनाओं सहित

THAKUR VIDYA MANDIR HIGH SCHOOL & JR.COLLEGE

III Terminal Exam 2018- 2019

Subject: History/ Civics.

Name: _____ STD: viii Div: _____ Roll No: _____

Marks: 60

Date: 20/03/2019

Time: 2hrs 30mins

HISTORY

Q1. A. Fill in the blanks in the given statements choosing the correct alternative from the brackets. (4)

1. _____ united the Ramoshis to rebel against the British .(Tatya Tope ,Umaji Naik ,Mangal Pandey)
2. The Depressed Classes mission was founded by _____(Maharshi Vitthal Ramji Shinde ,Swami Vivekanand ,Raja Rammohan Roy)
3. The Servants of India Society was founded by _____(M.G.Ranade ,Gopal Krishna Gokhale ,Lokmanya Tilak)
4. The State of Maharashtra was formed on 1st May _____(1957,1960,1955)

Q1. B. Identify the wrong pair and rewrite the corrected one. (4)

- a. 1.C.V. Raman –Nobel Prize
2.Patit Pawan Temple –Ratnagiri
3.Mahatma Phule -1st school for girls in Pune
4.Brahmo Samaj -Swami Vivekanand
- b. 1.The first president of Indian National Congress-Wyomesh Chandra Banerjee
2..Assassinated Rand - Chafekar Brothers
3. Partition of Bengal -Lord Dalhousie
- c. 4.Geeta Rahasya -Lokmanya Tilak
- c. 1.Azad Dasta -Usha Mehta
2.Lal Sena -General Awari
3.Azad Hind Government -Subhash Chandra Bose
4.Krantisinh Nana Patil -Parallel Government

4

- d.1.Gadkaris - Kolhapur
2.Kolams - Chota Nagpur
3.Santhals -Bihar
4.Gonds -Konkan

Q2. A. Complete the following concept map. (any 2) (4)

1)

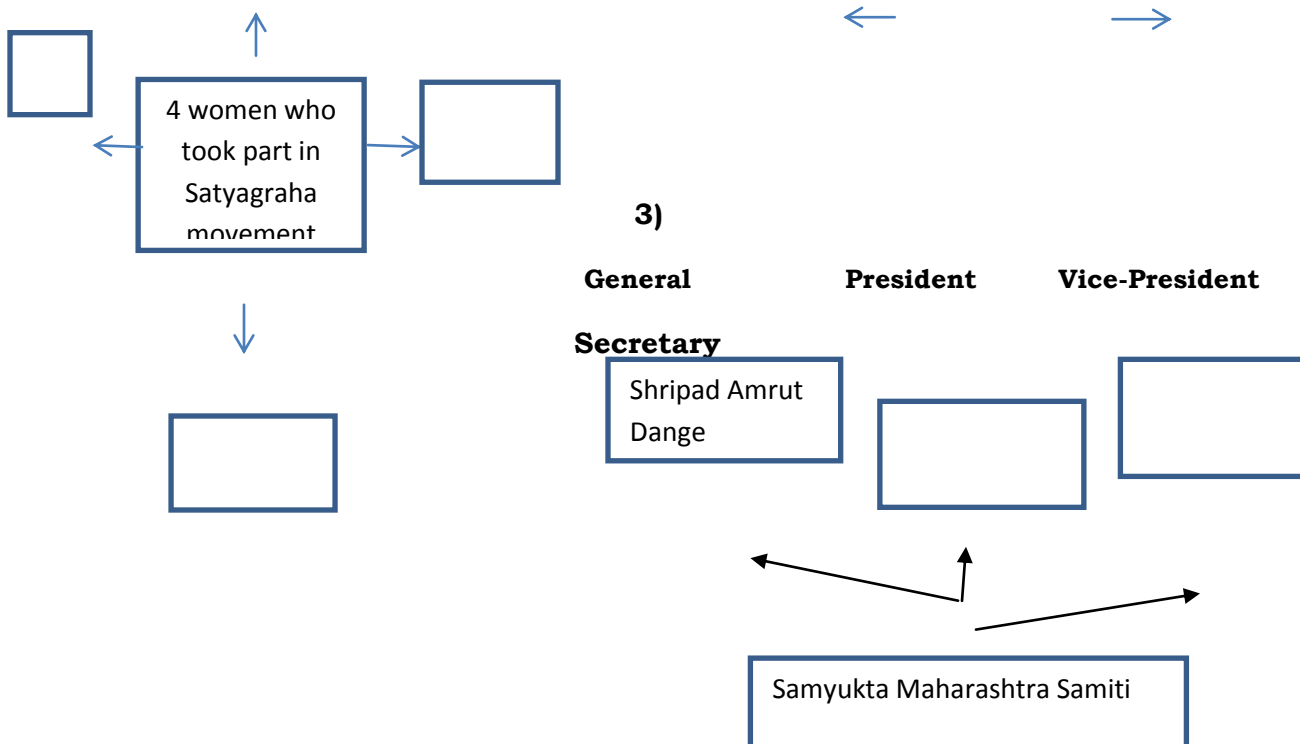


2)



Any 2 books
written by
Mahatma





Q2. B.Short Notes. (any 2)

(4)

1. Literary and Social work of Swatantryaveer Savarkar
2. Nationalistic Historiography
3. Inspirational account of Shirishkumar
4. Information about Mountbatten Plan

Q3.A.Explain the following statements with reasons.(any 2)

(6)

1. Khilafat Movement was started in India .
2. The deliberations in the First Round Table Conference proved to be meaningless.
3. The Parallel Government became a source of inspiration to the people.
4. The Indian National Congress approved the partition .
5. Junagad merged with India .

Q3. B. Answer the following in 25-30 words (any 2)

(6)

1. Where was the memorial of 106 martyrs erected ?What is it called ? .
2. Which restrictions were put up on the Blacks in South Africa according to the declaration of 1906 ?
3. Why did Gandhiji decide to break the Salt Act to begin the Satyagraha all over the country?

Q4. Read the passage and answer the questions given below.

(4)

In 1930 ,Dr Muhammad Iqbal ,a well known poet ,put forth the thought of an independent Muslim state.Later Chaudhary Rahmat Ali put up the idea of Pakistan .Barrister Muhammad Ali Jinnah put forth the two Nation Theory and demanded a separate Muslim nation named Pakistan .Indian National Congress was only a Hindu Organisation , the Muslims have no benefit of it.

QUESTIONS :

- 1.What thought was put forth in the year 1930 ?
- 2.Why did the Muslims have no benefit from INC?
- 3.Name the well known poet mentioned in the given passage .
- 4.Who put forth the two Nation Theory ?

Q5. Answer in detail. (any 2)

(8)

1. Why did the British Prime Minister send Sir Stafford Cripps to India ?
2. Explain the philosophy of Satyagraha .

3. Give information about Goa Liberation Movement .(4 points)

CIVICS

Q6. Fill in the blanks in the given statements choosing the correct alternative from the brackets . (4)

- 1.The Vice President is the ex-officio Chairman of the _____ .(Lok Sabha ,Rajya Sabha ,Supreme Court)
- 2.The tenure of the President is of _____ years. (3 , 4 ,5 ,)
- 3.Laws are made by _____ .(Legislature ,Judiciary ,Council of Ministers)
- 4.The _____ appoints the Governor .(President ,Chief Justice ,Chief Minister .

Q7. True or False with reasons. (any 2) (4)

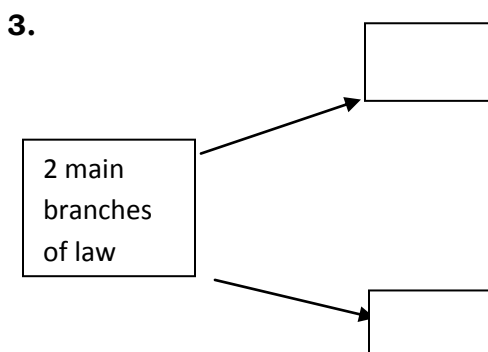
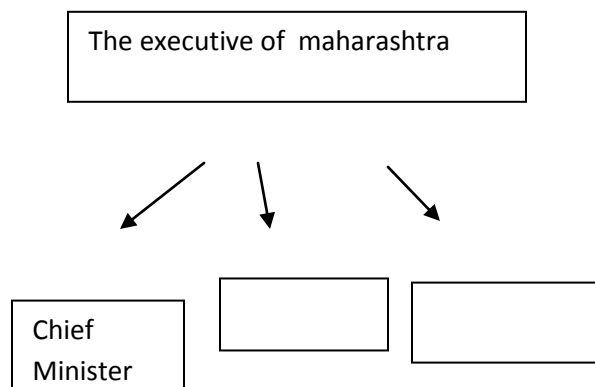
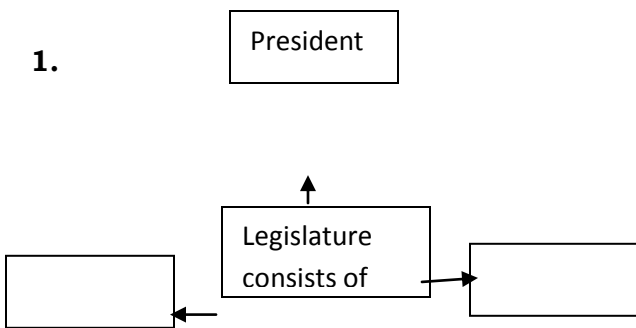
- 1.The tenure of Lok Sabha is 3 years .
- 2.The Chief Minister leads the country .
- 3.The High Court is the apex Court .

Q.8.A .Short Notes (any 2) (4)

- 1.Right to Information
- 2.Public Interest Litigation
- 3.Functions of the Chief Minister (any 2 points)

Q.8.B. Complete the following concept maps. (any 2) (4)

2.



Q.9 . Answer in brief (any 2) (4)

- 1. Enumerate the powers of the Governor .
- 2. Explain the concept Judicial Review .
- 3. Write in short about Jumbo Ministry

BEST OF LUCK

Thakur Educational Trust's (Regd.)
THAKUR VIDYA MANDIR HIGH SCHOOL & JR.COLLEGE
 III- Term exam 2018- 2019
 Subject: Maths.

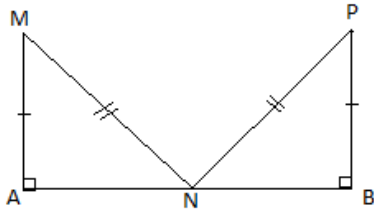
Name: _____ STD: VIII Div: _____ Roll No: _____
 Marks: 80 Date: 22/03/2019 Time:2hrs.45mins

Q1 A) Solve any eight of the following sub-questions (8)

- 1) Write $7/4$ in decimal form.
- 2) The lines in the same plane which do not intersect each other are called ---- lines.
- 3) $3^5 \times 3^2 = 3^{\quad}$
- 4) The segment joining the vertex and the midpoint of the opposite side is called a --- of the triangle.
- 5) The greatest index of the variable in the given polynomial is called the --- of the polynomial.
- 6) Solve : $4x=12$
- 7) We can express the correspondence between the vertices of any two triangles in ---- different ways.
- 8) Divide: $21m^2 \div 7m$
- 9) If the radius of circle is 21 cm find its diameter.

Q 1 B) Solve any four of the following sub-questions (8)

- 1) Find the cube of (1.2)
- 2) Expand : $(p+8)(p-3)$
- 3) State the test and correspondence of vertices by which the triangles are congruent.



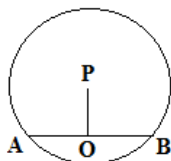
- 4) Solve: $2m+7=9$
- 5) What is the area of a parallelogram whose base is 12 cm and height 7 cm ?

Q2 A) Solve the following MCQ questions (8)

- 1) When two parallel lines are intersected by a transversal _____ angles are formed.
 a) 4 b) 2 c) 8 d) 6
- 2) The point of concurrence of medians of a triangle is called ____
 a) An incentre b) A circumcentre c) A centeroid d) An orthocentre
- 3) What is the discount at 15% on marked price Rs 500.
 a) Rs 75 b) Rs 15 c) Rs 150 d) Rs 425
- 4) $(-36x^4) \div 4x = ?$
 a) $9x^3$ b) $-9x^3$ c) $9x^5$ d) $-9x^5$
- 5) What is the mean of 1,2,3,4,5,6,7?
 a) 3 b) 4 c) 5 d) 6
- 6) The length of a rectangle is twice its breadth. What is the length, if the perimeter is 90cm?
 a) 30 cm b) 15 cm c) 45 cm d) 10 cm
- 7) If the length of diagonals of a rhombus are 11.2 cm and 7.5 cm then its area is ?
 a) 42 sq cm b) 24 cm^2 c) 84 cm^2 d) 48 sq cm
- 8) If the side of the cube is 1m then its volume is ?
 a) 1000 cm^3 b) 100 cm^3 c) 1000000 cm^3 d) 10000 cm^3

Q 2 B) Solve any four of the following sub-questions (8)

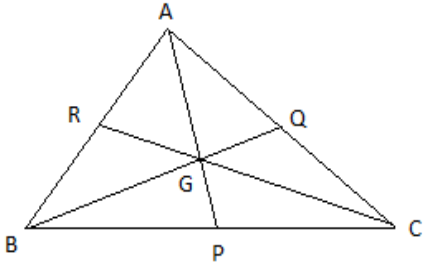
- 1) Factorise: $3x^2+14x+15$
- 2) Find the value: 12.5 % of 400.
- 3) Solve: $\frac{x-9}{x-5} = \frac{5}{7}$
- 4) Draw a circle of radius 2.7cm and draw a tangent to the circle at any point on it.
- 5) In a circle with centre p, chord AB is drawn of length 13 cm, seg $PQ \perp$ chord AB, then find l(QB).



Q 3 A) Complete any four of the following activities

(8)

1) Point G is the centroid of triangle ABC



1) If $l(RG) = 2.5$ then $l(GC) = \boxed{}$

2) If $l(BG) = 6$ then $l(BQ) = \boxed{}$

3) If $l(AP) = 6$ then $l(AG) = \boxed{}$

2) John sold books worth Rs 4500 for a publisher. For this he received 15% commission. Complete the following activity to find the total commission John obtained.

Commission obtained = $\frac{\boxed{} \times \boxed{}}{\boxed{}}$ Commission = Rupees. $\boxed{}$

3) Find the simple interest on Rs 9000 invested at the rate of 10 p.c.p.a. for 3 years

$$I = \frac{P \times \boxed{} \times R}{100}$$

$$= \frac{\boxed{}}{100}$$

$$= \text{Rs } \boxed{}$$

4) The numbers of pages of a book Ninad read for five consecutive days were 60, 50, 54, 46, 50. Find the average number of pages he read every day.

$$\text{Average} = \frac{\text{Sum of all scores}}{\text{Total number of scores}}$$

$$= \frac{60 + \boxed{} + \boxed{} + \boxed{} + 50}{\boxed{}} = \frac{\boxed{}}{\boxed{}} = \boxed{}$$

5) If area of a parallelogram is 112 sq cm and base of it is 10 cm then find its height.

Area of parallelogram = $\boxed{} \times \boxed{}$

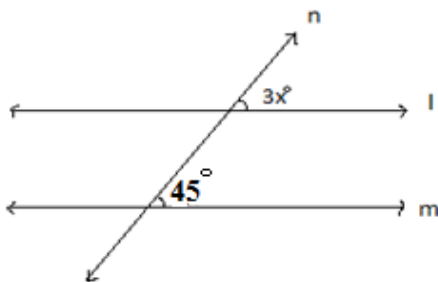
$112 = 10 \times \boxed{}$

Height = $\boxed{}$ cm.

Q 3 B) Solve any four of the following sub-questions

(8)

1) In the figure, line $l \parallel$ line m and line n is the transversal. With the given information find the value of x .



2) Find the cube root of 3375.

3) Solve: $x^2 + x - 20 = 0$

4) Divide. Write the quotient and remainder: $(2y^3 + 4y^2 + 3) \div 2y^2$

5) If the radius of the base of the cylinder is 7 cm and its height is 15cm, then find its volume.

Q 4) Solve any six of the following sub-questions**(18)**

1) Simplify:

$$\frac{4x^2-11x+6}{16x^2-9}$$

2) Construct a parallelogram ABCD such that $l(BC) = 7$ cm, $m\angle ABC = 40^\circ$, $l(AB) = 3$ cm.

3) The marked price of a mixer is Rs 2300. A customer purchased it for Rs 1955. Find the percentage of discount offered to the customer.

4) The number of boys and girls, in std 5 to std 8 in a Z.P school is given in the table. Draw a subdivided bar graph to show the data. (Scale: On Y axis, 1cm= 10 students)

Standard	5 th	6 th	7 th	8 th
Boys	34	26	21	25
Girls	17	14	14	20

5) A principal amounts to Rs 13924 in 2 years by compound interest at 18 p.c.p.a. Find the principal.

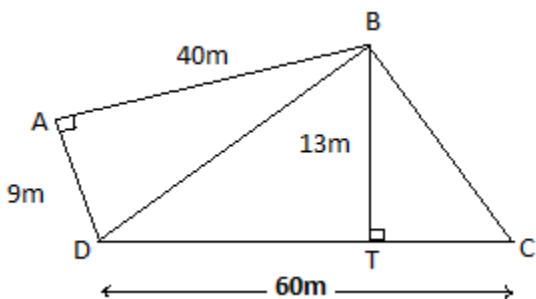
6) Draw a circle of radius 3.3 cm. Draw a chord PQ of length 6.6 cm. Draw tangents to the circle at points P and Q.

7) How much water will a tank hold if the interior diameter of the tank is 1.6 m and its depth is 0.7m?

Q 5) Solve any two of the following sub-questions**(8)**

1) A milk centre sold milk to 50 customers .The table below gives the number of customers and the milk they purchased .Find the mean of the milk sold by direct method.

Milk sold (litre)	1-2	2-3	3-4	4-5	5-6
Number of customers	17	13	10	7	3

2) Some measures are given in the adjacent figure, find the area of $\square ABCD$.

3) If 15 workers can build a wall in 48 hours, how many workers will be required to do the same work in 30 hours.

Q 6) Solve any two of the following sub-questions**(6)**

1) The radius of the base of a cylindrical wooden block is 5 cm and its volume is 1100cu.cm. How many discs of radius 5 cm and height 2 cm can be cut from this block of wood?

2) When Nikita sold her old two wheeler through an agent, she got Rs 17,150 for it after paying the agent. If the commission was paid at 2%, find the selling price of the vehicle.

3) A scooter was bought in April 2005 for Rs 42,000. If its value falls by 10 % every year what will its value be in April 2007?

ALL THE BEST

Science I

Q1(A) Fill in the blanks :

(5)

- 1) The electron shell _____ is nearest to the nucleus .
- (B) Name the following :
 - 1) The distance travelled by light in one year .
- (C) Match the column :
 - 1) Silver a) Thermometer
 - 2) Mercury b) medicines
- (D) Write the correlation for the second pair :
 - a) K : 2 :: M :: _____
- (E) State True or False and correct the false statement :
 - 1) Neutrons are electrically charged particle which forms a part of the nucleon .

(B) Choose the correct alternative and rewrite the statement:

(5)

- 1) _____ is a metalloid .
 - a) Aluminium b) Antimony c) Zinc d) Mercury
- 2) Pure _____ is soft ..
 - a) Aluminium b) Antimony c) gold d) Platinum
- 3) Sodium atoms and sodium ions _____.
 - a) are chemically the same .
 - b) have the same number of protons .
 - c) have the same number of electrons .
 - d) form covalent bond
- 4) Sound waves cannot travel through _____.
 - a) solid b) liquid c) gas d) vacuum
- 5) In the experiment to show that a medium is necessary for propagation of sound , as the quantity of air inside the belljar decreases , the level of ringing heard outside _____.
 - a) increases b) decreases c) fluctuates d) changes at regular intervals

Q2) Answer the following : (any 5)

(10)

- 1) What is potential difference ? Write its SI unit .
- 2) In an electric circuit, what is the direction of conventional current?
- 3) What is vibration?
- 4) What is angle of reflection?
- 5) Why was the name black hole given?
- 6) State the properties of metals .
- 7) What determines the blood group ?

Q3) Answer the following : (any 5)

(15)

- 1) Differentiate between acid and base .
- 2) Why is the bore of a thermometer made very small?
- 3) Write some uses of electromagnets.
- 4) Although there are charged particles in an atom , it is said to be electrically neutral . Explain .
- 5) Why Ni—cd batteries are widely used in portable electronic devices instead of lead acid batteries ?.
- 6) The specific heat of gold is 0.03 cal/(g° c).Express it in J/(kg°c)
- 7) Explain the term frequency of a sound wave .

Q4) Answer the following :(any 1)

(5)

- 1) How is the stability of stars maintained ?
- 2) Write a short note on endstages of stars having mass between 8 and 25 times the mass of the sun.

Science II

Q5A) Name the following :

(5)

1) Flammable gases .

(B) Fill in the blanks :

1) Man is _____ in an ecosystem .

(C) Who am I ?

1) Microorganisms that act on dead bodies of plants and bring about degradation .

D) Odd man out:

A , O , K , AB

E) State true or false and correct the false statement:

1) The structure which is formed due to this reciprocal relationships is called niche ..

C) Choose the correct alternative and rewrite the statement :

(5)

1) _____ is the secretory organ of cell .

a) Lysosomes b) Cellwall c) golgi body d) Ribosomes

2) _____ is a green pigment .

a) chloroplast b) chromoplast c) leucoplast d) Nucleus

3) _____ is ATP producing factory

a) Chloroplast b) Nucleus c) Mitochondria d) Endoplasmic reticulum

4) From which organelle the respiratory system of man begin ?

) trachea b) lungs c) alveoli d) nose

5) How many molecules of ATP are produced from one molecule of glucose?

a) 26 b) 36 c) 38 d) 40

Q6) Answer the following : (any 5)

(10)

1) Explain the nutrition in fungi ..

2) What is acid rain?

3) Explain briefly the water pollutants .

4) How is borosilicate glass produced ?

5) Distinguish between RBC and WBC .

6) write a short note on objectives of mockdrill.

7) Why human blood is redcoloured ?

Q7) Answer the following :(any 5)

(15)

1) Write the characteristics of kingdom Protista .

2) Mention the preventive measures of air pollution .

3) What are the natural reasons for water pollution ?

4) Write a short note on structure and functions of heart with the help of a diagram .

5) Distinguish between plant cell and animal cell .

6) Write a short note on disaster management authority .

7) How is energy produced in mitochondria ?

Q8) Answer the following: (any 1)

(5)

1) What are the effects of increased population on ecosystems ?

2) How is urbanization responsible for destruction of ecosystems?

ALL THE BEST